



spardhaguru2022



Spardhaguru Current affairs



Spardhaguru1




SpardhaGuru



Spardha.guru



www.spardha.guru



Question 1 :

A vessel of milk and water contains 20% water. If 25 liter of the mixture was taken out and replaced by water the ratio of milk and water becomes 3 : 1 then, find the initial quantity of milk in the vessel.

1. 240 litres
2. 260 litres
3. 300 litres
4. **320 litres**
5. 360 litres

Question 2 :

In the given question, five words are printed in bold and are numbered A, B, C, D and E. The position of some highlighted words may be incorrect and need to be exchanged with another highlighted to make the sentence correct. Find the words that need to be exchanged. In case the given sentence is correct, your answer is option (5) i.e. 'No exchange required'. The razzmatazz for toilet construction/ODF certification has overshadowed (A) the fact that the essence (B) of universal water and sanitation coverage is derived (C) from the right to life, guaranteed (D) by Article 21 of the Constitution.

1. Both A-D and B-C
2. Only A-B
3. Only B-C
4. Both A-B and C-D
5. **No exchange required**

Question 3 :

Two trains coming from opposite sides cross each other in 10 seconds. If the length of the first train and the second train are 125 m and 175 m respectively, and the speed of the first train is 72 km/h, then find the speed of the second train.

1. 48 km/h
2. 60 km/h
3. **36 km/h**
4. 84 km/h
5. 90 km/h

Question 4 :

In the following sentence, a part of the sentence is emboldened. Below are given alternatives to the emboldened part, which may improve or replace the meaning of the sentence. Choose the correct alternative. In case no improvement is needed, choose the alternative that indicates 'No improvement'. I was so angry at myself for making such a big mistake.

1. so angry about myself
2. so angry on myself
3. so angry for myself
4. **so angry with myself**
5. No Improvement

Comprehension :

Directions: What will come in place of question mark (?) in the following question?

Question 5 :

$$(3(64/343) + 52 \times 23/175) = ? \times 32$$

$$1.1/9$$

$$2.1/7$$

$$3.5/7$$

$$4.5/9$$

$$5.3/7$$

Comprehension :

Read the following passage, few blanks have been provided which have to be filled according to the options given below in such a manner that they provide grammatical and contextual meaning to the sentences. A man who was the lone survivor of a terrible shipwreck was washed ashore on a tiny uninhabited island. (1)-----and alone, the man cried out to God to rescue him from his terrible fate. Unfamiliar with survival (2)-----, the man struggled to (3)----- . Eventually, he was





spardhaguru2022



Spardhaguru Current affairs



Spardhaguru1




SpardhaGuru



Spardha.guru



www.spardha.guru



able to construct a hut to protect him and his few possessions. Every day the man faithfully scanned the horizon for the answer to his prayer. One day, after (4)-----for food, he arrived home and found his little hut burning to the ground. There was nothing left but ashes and smoke. "God, how could you do this to me!!" He cried. Broken and (5)----- he sobbed himself to sleep. The next day, he was awakened by the sound of a ship. It had come to rescue him. He asked the sailor, "How did you know I was here?" "As we were heading East, we saw your smoke signal," the sailor replied.

Question 6 :

Select the most appropriate option to fill in blank no.

1. Collecting
2. Squandering
3. Blowing
4. Scavenging
5. Wasting

Comprehension :

Read the following passage, few blank spaces have been provided which have to be filled according to the options given below in such a manner that they provide grammatical and contextual meaning to the sentences. A man who was the lone survivor of a terrible shipwreck was washed ashore on a tiny uninhabited island. (1)----- and alone, the man cried out to God to rescue him from his terrible fate. Unfamiliar with survival (2)-----, the man struggled to (3)----- . Eventually, he was able to construct a hut to protect him and his few possessions. Every day the man faithfully scanned the horizon for the answer to his prayer. One day, after (4)-----for food, he arrived home and found his little hut burning to the ground. There was nothing left but ashes and smoke. "God, how could you do this to me!!" He cried. Broken and (5)----- he sobbed himself to sleep. The next day, he was awakened by the sound of a

ship. It had come to rescue him. He asked the sailor, "How did you know I was here?" "As we were heading East, we saw your smoke signal," the sailor replied.

Question 7 :

Select the most appropriate option to fill in blank no.

1. Marooned
2. Leave
3. Stored
4. Despaired
5. Gloomy

Comprehension :

Read the following passage, few blank spaces have been provided which have to be filled according to the options given below in such a manner that they provide grammatical and contextual meaning to the sentences. A man who was the lone survivor of a terrible shipwreck was washed ashore on a tiny uninhabited island. (1)----- and alone, the man cried out to God to rescue him from his terrible fate. Unfamiliar with survival (2)-----, the man struggled to (3)----- . Eventually, he was able to construct a hut to protect him and his few possessions. Every day the man faithfully scanned the horizon for the answer to his prayer. One day, after (4)----- for food, he arrived home and found his little hut burning to the ground. There was nothing left but ashes and smoke. "God, how could you do this to me!!" He cried. Broken and (5)----- he sobbed himself to sleep. The next day, he was awakened by the sound of a ship. It had come to rescue him. He asked the sailor, "How did you know I was here?" "As we were heading East, we saw your smoke signal," the sailor replied.

Question 8 :

Select the most appropriate option to fill in blank no.

2. Ploy





spardhaguru2022



Spardhaguru Current affairs



Spardhaguru1




SpardhaGuru



Spardha.guru



www.spardha.guru



2. Tactics

- Device
- Means
- Game

Comprehension :

Read the following passage, few blanks have been provided which have to be filled according to the options given below in such a manner that they provide grammatical and contextual meaning to the sentences. A man who was the lone survivor of a terrible shipwreck was washed ashore on a tiny uninhabited island. (1)---- and alone, the man cried out to God to rescue him from his terrible fate. Unfamiliar with survival (2)-----, the man struggled to (3)----- . Eventually, he was able to construct a hut to protect him and his few possessions. Every day the man faithfully scanned the horizon for the answer to his prayer. One day, after (4)----- for food, he arrived home and found his little hut burning to the ground. There was nothing left but ashes and smoke. "God, how could you do this to me!!" He cried. Broken and (5)----- he sobbed himself to sleep. The next day, he was awakened by the sound of a ship. It had come to rescue him. He asked the sailor, "How did you know I was here?" "As we were heading East, we saw your smoke signal," the sailor replied.

Question 9 :

Select the most appropriate option to fill in blank no.

- Live
- Endure
- Stabilize
- Firm
- Fade

Comprehension :

Read the following passage, few blanks have been provided which have to be filled according to the options given below in such a manner that they

provide grammatical and contextual meaning to the sentences. A man who was the lone survivor of a terrible shipwreck was washed ashore on a tiny uninhabited island. (1)----- and alone, the man cried out to God to rescue him from his terrible fate. Unfamiliar with survival (2)-----, the man struggled to (3)----- . Eventually, he was able to construct a hut to protect him and his few possessions. Every day the man faithfully scanned the horizon for the answer to his prayer. One day, after (4)----- for food, he arrived home and found his little hut burning to the ground. There was nothing left but ashes and smoke. "God, how could you do this to me!!" He cried. Broken and (5)----- he sobbed himself to sleep. The next day, he was awakened by the sound of a ship. It had come to rescue him. He asked the sailor, "How did you know I was here?" "As we were heading East, we saw your smoke signal," the sailor replied.

Question 10 :

Select the most appropriate option to fill in blank no.

- Daydream
- Hoped
- Planned
- Longed
- Despaired

Question 11 :

The ratio of milk and water is 5:4 in a mixture containing 18 litres solution. How much water should be added to his mixture such that the new ratio of the milk and water in the mixture will be 2 : 3?

- 5 litres
- 6 litres
- 7 litres
- 8 litres
- 9 litres

Direction: The following questions are based on the five three - digit numbers given below:





spardhaguru2022



Spardhaguru Current affairs



Spardhaguru1




SpardhaGuru



Spardha.guru



www.spardha.guru



684 512 437 385 296

Question 12 :

If 2 is added to the first digit of each of the numbers how many numbers thus formed will be divisible by three?

1. None
2. **One**
3. Two
4. Three
5. None of these

Question 13 :

In the following sentence, a part of the sentence is emboldened. Below are given alternatives to the emboldened part, which may improve or replace the meaning of the sentence. Choose the correct alternative. In case no improvement is needed, choose the alternative that indicates "No improvement". There is no more room for new players in this arena.

1. **There is no more space**
2. No more void is available
3. There is no room
4. There is no more accommodation
5. No Improvement

Question 14 :

In the following questions, a statement is divided into 5 different segments. Part (A) in the sentence is fixed and other parts may not be in the correct sequence. You have to rearrange the other parts of the sentence to make it contextually and grammatically correct and if the correct sequence doesn't match any of the given sequences, mark (5) i.e., "None of the above" as your answer. The nearly 350 senior risk professionals in industries from retail to manufacturing who were surveyed (A)/ 68% identifying a "prolonged global recession" as most likely over the coming 18 months. (B)/ for the report fretted most about the economic impact, with (C)/ A

surge in bankruptcies and industry failures also featured highly (D)/ as did concern over another COVID-19 outbreak (E).

1. ABCDE
2. ADBCE
3. **ACBDE**
4. ADECB
5. None of the Above

Question 15 :

In the sentence given below one part is emboldened. The part given in bold may or may not be correct. Select the best alternative among the four given which can replace the part in bold to make the sentence grammatically and contextually correct. If the part given in bold is already correct and does not require any replacement, choose option 5 i.e., "No improvement" as your answer. In Britain, Germanic tribes arrived and settle at the east coast in 5CE.

1. settle on the
2. **settled on the**
3. settled by the
4. settled at the
5. No improvement

Question 16 :

In the question given below four sentences are given which may or may not be grammatically correct. Find the sentences which are both grammatically and contextually correct and choose the option according to it. If all the sentences are grammatically and contextually correct then choose option 5 i.e., "All are correct" as your choice. I. Fourteen kilometers are not a short distance, to reach my office daily. II. Good reading reflect the sense of liberal educated mind III. Mohanlal's train was late and it reached Kolkata a little after midnight. IV. If you transform your energy positively, it naturally becomes compassion and love.

1. Only I
2. Only II





spardhaguru2022



Spardhaguru Current affairs



Spardhaguru1




SpardhaGuru



Spardha.guru



www.spardha.guru



3. Both II and III
4. **Both III and IV**
5. All are correct

Question 17 :

In the question given below four sentences are given which may or may not be grammatically correct. Find the sentences which are both grammatically and contextually correct and choose the option according to it. If all the sentences are grammatically and contextually correct then choose option 5 i.e. "All are correct" as your choice. I Ability and technology

aversetherelationshipbetweenmotivationandperformance.IIJobperformanceisaffectedbyanumberoffactors.IIIHe adverted to the problem of air pollution in his speech. IV Swami Dayanand Saraswati is remembered for reverence and affection among the social reformers of the nineteenth century.

1. Only I
2. **Only III**
3. Both III and IV
4. Both I and III
5. All are correct.

Question 18 :

In the question given below four sentences are given which may or may not be grammatically correct. Find these sentences which are both grammatically and contextually correct and choose the option according to it. If all the sentences are grammatically and contextually correct then choose option 5, "All are correct" as your choice. I. India is a country that respects spiritualism much more than materialism. II. When we talk about investing in education, a question arises as to what kind of education needs to be given to the youngsters. III. Rohan is so magnanimous that everyone is always eager to help him in his project. IV. She is the best and the wisest girl in the class.

1. Only I
2. Only III
3. Both III and IV

4. Both I and III
5. **All are correct**

Direction: The following questions are based on the five three – digit numbers given below:

684 512 437 385 296

Question 19 :

What will be the resultant number if the second digit of the second lowest number is divided by the third digit of the highest number ?

1. **2**
2. 3
3. 0
4. 1
5. 4

Comprehension :

Directions: What will come in place of question mark (?) in the following question?

Question 20 :

14.28% of (49% of 14.28) + 26.67 of (15% of 200) = ?

1. 2
2. **3**
3. 4
4. 5
5. 6

Comprehension :

Direction: Read the following information carefully and answer the questions given below. Seven boxes - A, B, C, D, E, F, and G are placed in a stack one above the other. More than three boxes are placed between A and F which is placed below A. Box G is placed three places above box B. Two boxes are placed between F and C. As many boxes are placed above A as are placed below B. The number of boxes placed below G is one less than the number of boxes placed above box D.

Question 21 :





spardhaguru2022



Spardhaguru Current affairs



Spardhaguru1




SpardhaGuru



Spardha.guru



www.spardha.guru



How many boxes are placed below box C?

1. **Four**

2. Three

3. Two

4. One

5. Five

Question 22 :

The average weight of fifteen boxes is 60 kg. Three boxes of weight 30 kg, 35 kg, and 32 kg were removed and two new boxes of average weight 43 kg were included. What is the difference in the average weights of the boxes after replacement?

1. 5 kg

2. 2 kg

3. **3.5 kg**

4. 4.5 kg

5. 2.5 kg

Question 23 :

A sum of money when invested for 8 years on simple interest doubles itself. $\frac{1}{3}$ rd of the amount collected after 8 years is invested again on simple interest at double rate for 3 years. If the amount collected after 3 years is Rs. 21000 then, find the sum invested initially.

1. Rs. 16000

2. Rs. 20000

3. Rs. 15000

4. **Rs. 18000**

5. None of these

Question 24 :

The ratio of ages of Sunil and his wife Tanu is 3:4. Sum of the ages of another couple Rohan and Naina is 9 years more than the sum of the ages of Sunil and Tanu. If the average age of these two couples and 4 years old son of Rohan and Naina is 25 years then, find the age of Tanu.

1. 30 years

2. **32 years**

3. 28 years

4. 36 years

5. 40 years

Comprehension :

Directions: What will come in place of question mark (?) in the following question?

Question 25 :

$$441 + (729 \times 3 - 3) + 25\% \text{ of } 64 = ?$$

1. 36

2. 22

3. **38**

4. 42

5. 30

Comprehension :

Directions: What will come in place of question mark (?) in the following question?

Question 26 :

$$23 + 22 \times (27)^{1/3} + (216)^{1/3} = ?$$

1. **95**

2. 85

3. 75

4. 105

5. 98

Comprehension :

Directions: What will come in place of question mark (?) in the following question?

Question 27 :

$$(1331)^{1/3} + 121 + 11 - 8\% \text{ of } 400 = ?$$

1. **1**

2. 2

3. 3

4. 4

5. 10

Question 28 :





spardhaguru2022



Spardhaguru Current affairs



Spardhaguru1




SpardhaGuru



Spardha.guru



www.spardha.guru



A boat takes 18 hours to travel downstream from point A to point B and comes back to point C midway between A and B. If the speed of the stream is 5 km/hr and the speed of the boat in still water is 15 km/hr, what is the distance between A and B?

1. **180 km**
2. 190 km
3. 195 km
4. 200 km
5. 210 km

Comprehension :

Direction: The bar graph below shows the number of people who buy different vegetables (Potato, Tomato, Ladyfinger, Brinjal, and Onion) from a market. It also shows the per kg rate of these vegetables. Study the graph carefully and answer the questions that follow.

Question 29 :

Out of the total people who bought potatoes, $\frac{1}{3}$ of them took 8 kg each, 20% of them took 6 kg each, and the rest took 5 kg each. Find the total amount of money paid for Potatoes by all the people.

1. Rs. 13750
2. Rs. 14250
3. Rs. 13500
4. **Rs. 13950**
5. Rs. 14550

Comprehension :

Direction: The bar graph below shows the number of people who buy different vegetables (Potato, Tomato, Ladyfinger, Brinjal, and Onion) from a market. It also shows the per kg rate of these vegetables. Study the graph carefully and answer the questions that follow.

Question 30 :

The ratio of males and females who bought Ladyfinger is 2 : 7. If all the males bought x kg Ladyfinger and all the women bought (x -

2) kg Ladyfinger and the total amount paid by the people who bought Ladyfinger was Rs. 6200 then, find the value of x.

1. 6
2. **5**
3. 4
4. 7
5. 3

Comprehension :

Direction: The bar graph below shows the number of people who buy different vegetables (Potato, Tomato, Ladyfinger,

Brinjal, and Onion) from a market. It also shows the per kg rate of these vegetables. Study the graph carefully and answer the questions that follow.

Question 31 :

All the people who bought Tomato took 4 kg each and all the people who bought Brinjal took 2 kg each. Find the total amount of money paid by all the people who bought Tomato and Brinjal.

1. **Rs. 15400**
2. Rs. 14400
3. Rs. 15800
4. Rs. 16400
5. Rs. 16000

Comprehension :

Directions: What will come in place of the question mark (?) in the following number series?

Question 32 :

- 1, 0, 3, ?, 85, 516

1. 8
2. 12
3. 14
4. **16**
5. None of these

Comprehension :





spardhaguru2022



Spardhaguru Current affairs



Spardhaguru1




SpardhaGuru



Spardha.guru



www.spardha.guru



Directions: What will come in place of the question mark(?) in the following number series?

Question 33 :

2, 0, 1, ?, 27, 70

1. 16
2. 8
3. 19
4. 20
5. None of these

Comprehension :

Directions: What will come in place of the question mark(?) in the following number series?

Question 34 :

- 3, - 6, - 2, - 8, ?, - 48/5

1. - 10
2. - 6/5
3. - 8/5
4. - 3/2
5. None of these

Comprehension :

Directions: What will come in place of the question mark(?) in the following number series?

Question 35 :

- 7, ?, - 2, 4, 3, - 2

1. - 3
2. 10
3. 5
4. - 1
5. None of these

Comprehension :

Directions: Read the following passage and answer the questions accordingly: According to data given by a tourist company, the total number of people who visited Goa, Mumbai, Nanital, and Shimla in

August is 40% more than the total number of people who visited these places in July. The ratio of people who have visited Goa, Mumbai, Nanital, and Shimla in August is 9 : 7 : 11 : 8. There has been a 20% increase in people who visited Goa and a 25% increase in people who visited Mumbai in August compared to July. The ratio of people who visited Nainital and Shimla in July is in Ratio 3 : 2. The Total number of people who visited these 4 places in July is 100,000.

Question 36 :

What is the percentage increase in number of people visiting Nanital in August compared to July?

1. 42%
2. 38%
3. 46%
4. 50%
5. 54%

Comprehension :

Directions: Read the following passage and answer the questions accordingly: According to data given by a tourist company, the total number of people who visited Goa, Mumbai, Nanital, and Shimla in August is 40% more than the total number of people who visited these places in July. The ratio of people who have visited Goa, Mumbai, Nanital, and Shimla in August is 9 : 7 : 11 : 8. There has been a 20% increase in people who visited Goa and a 25% increase in people who visited Mumbai in August compared to July. The ratio of people who visited Nainital and Shimla in July is in Ratio 3 : 2. The Total number of people who visited these 4 places in July is 100,000.

Question 37 :

What is the ratio of number of people visiting Mumbai and Goa in August to number of people visiting Nanital and Shimla in July?

1. 154 : 113
2. 175 : 132
3. 160 : 119





spardhaguru2022



Spardhaguru Current affairs



Spardhaguru1




SpardhaGuru



Spardha.guru



www.spardha.guru



4. 155 : 118
5. None of these

Comprehension :

Directions: Read the following passage and answer the questions accordingly: According to data given by a tourist company, the total number of people who visited Goa, Mumbai, Nainital, and Shimla in August is 40% more than the total number of people who visited these places in July. The ratio of people who have visited Goa, Mumbai, Nainital, and Shimla in August is 9 : 7 : 11 : 8. There has been a 20% increase in people who visited Goa and a 25% increase in people who visited Mumbai in August compared to July. The ratio of people who visited Nainital and Shimla in July is in Ratio 3 : 2. The Total number of people who visited these 4 places in July is 100,000.

Question 38 :

If the number of people who visited Shimla in July is 15% less than the number of people who visited Shimla in June, then, find the number of people who visited Shimla in June.

1. 23000
2. 22400
3. 22000
4. 23200
5. 22600

Comprehension :

Directions: What will come in place of the question mark(?) in the following number series?

Question 39 :

9327, 3110, 623, 90, ?, 2

1. 11
2. 15
3. 10
4. 9
5. None of these

Comprehension :

Direction: The bar graph below shows the number of people who buy different vegetables (Potato, Tomato, Ladyfinger, Brinjal, and Onion) from a market. It also shows the per kg rate of these vegetables. Study the graph carefully and answer the questions that follow.

Question 40 :

Find the ratio of the number of males and females who bought Onion if the total amount of money paid by all the males for Onion is Rs. 500 more than the total amount of money paid by all the females for Onion.

1. 4 : 3
2. 5 : 2
3. 7 : 4
4. 7 : 3
5. 5 : 3

Question 41 :

A trader has 600 kg of wheat, a part of which he sells at 15% profit and the remaining part at a 20% loss. Overall, he has a loss of 6%. How many kg of rice did he sell at a 20% loss?

1. 250 kgs
2. 320 kgs
3. 420 kgs
4. 360 kgs
5. None of these

Question 42 :

In the following sentence, a part of the sentence is emboldened. Below are given alternatives to the emboldened part, which may improve or replace the meaning of the sentence. Choose the correct alternative. In case no improvement is needed, choose the alternative that indicates 'No improvement required.' They must charge the lead in civilisn gour streets and reclaiming them for local communities.

1. Charge for the lead
2. Lead





spardhaguru2022



Spardhaguru Current affairs



Spardhaguru1




SpardhaGuru



Spardha.guru



www.spardha.guru



3. Take lead
4. **Take the lead**
5. No improvement required

Question 43 :

In the following questions, a statement is divided into 5 different segments. Part (A) in the sentence is fixed and other parts may not be in the correct sequence. You have to rearrange the other parts of the sentence to make it contextually and grammatically correct and if the correct option of sequence doesn't match any of the given sequence mark (5) i.e., "None of the above" as your answer. The government's push to reform India's agriculture sector has (A)/ of Indian agriculture are noteworthy (B)/ debate, two long-standing characteristics (C)/ divided opinions and triggered a debate (D)/ about the state of Indian agriculture. In the context of this (E).

1. ADCBE
2. **ADECB**
3. ACBDE
4. ABCDE
5. None of the above

Question 44 :

In the following questions, a statement is divided into 5 different segments. Part (A) in the sentence is fixed and other parts may not be in the correct sequence. You have to rearrange the other parts of the sentence to make it contextually and grammatically correct and if the correct sequence doesn't match any of the given sequences, mark (5) i.e., "None of the above" as your answer. In the Sheikh Jarrah neighbourhood of East Jerusalem, (A)/ of several Palestinian families (B)/ the impending eviction (C)/ the Israeli courts have recently declared (D)/ from their homes to be legal. (E)

1. ADBEC
2. ADECB
3. **ADCBE**
4. ABCDE
5. None of the above

Question 45 :

Two friends A and B start a business with an investment of Rs 4000 and Rs 4200 respectively. If after 5 months on either friend C joined them with a capital of Rs 3600. After 2 months of joining C, B left the business. If the total profit of B at the end of the year is Rs 24500 then, find the profit of A.

1. Rs. 36500
2. Rs. 40520
3. Rs. 35000
4. Rs. 50000
5. **Rs. 40000**

Question 46 :

In the following questions, a statement is divided into 5 different segments. Part (A) in the sentence is fixed and other parts may not be in the correct sequence. You have to rearrange the other parts of the sentence to make it contextually and grammatically correct and if the correct option of sequence doesn't match any of the given sequence mark (5) i.e., "None of the above" as your answer. The Stockholm Convention on Persistent Organic Pollutants is a global (A)/ that remain intact in the environment for long periods, become widely distributed geographically, (B)/ treaty to protect human health and the environment from chemicals (C)/ impacts on human health or on the environment (D)/ accumulate in the fatty tissue of humans and wildlife, and have harmful (E).

1. **ACBED**
2. ACBDE
3. ADBCE
4. ABCDE
5. None of the above

Question 47 :

A sentence with an emboldened part is given below. This sentence is followed by three different phrases that could be a suitable alternative(s) for the emboldened part. Choose the phrase(s) (one or more than one) that could replace the one given in the sentence. If the sentence is correct as it is and does not require any improvement as such then





spardhaguru2022



Spardhaguru Current affairs



Spardhaguru1




SpardhaGuru



Spardha.guru



www.spardha.guru



mark(E) i.e.,

"No Improvement required" as your answer. Rashmi has teased everybody and everything which remind her of her mistakes i) which have reminded ii) who reminds her iii) that reminds her

1. Only i
2. Only ii
3. Only iii
4. ii and iii
5. No improvement required

Question 48 :

Which of the words/phrases (A), (B), (C) given below should replace the words/phrases respectively in the following sentences to make them meaningful and grammatically correct. If the sentence is correct, then mark the option "No Improvement Required". While (A) stressing the role of investment in (B) restored the economy the Economic Survey also states that the twin balance sheet issue has to be (C) undertake on an urgent basis.

1. Highlighting, slowing, tackled
2. emphasizing, stimulating, addressed
3. shouting, excited, focused
4. Assuaging, invigorating, overlooked
5. No improvement required

Question 49 :

Each question consists of four sentences and some sentences are grammatically incorrect or inappropriate. Read each sentence to find out the error in the sentence(s) and select the option that indicates the grammatically incorrect and inappropriate sentence(s). Ignore the error of punctuation, if any. A. As much with the pen, Ram Prasad Bismil was equally adept at wielding the pistol too. B. This fire-spitting revolutionary believed in attaining freedom by force. C. Bismil's life and writing along with that of others is essential to make today's generation aware in the country's freedom struggle. D. It will help tackle today's prevailing corruption and communalism.

1. Only B
2. A and C
3. B and D
4. A, C and D
5. All are incorrect

Comprehension :

Read the passage carefully and answer the questions that follow. The passage of a statutory resolution and a Bill in Parliament — "abrogating" Article 370 which confers special political status on Jammu and Kashmir, and bifurcating the State into two Union Territories — has robbed the Kashmir Valley of its political autonomy, or whatever remains of it after all these years. It may deepen the State's trust deficit vis-a-vis the Centre. The "abrogation" of Article 370, being hailed as a "glorious" move, is itself a misnomer. "Amending" or "abrogating" Article 370 is a Constitutional improbability; the amending provision of Article 368 says no Constitutional amendments have effect in relation to J&K unless applied by Order of the President under Article 370 that requires the concurrence of the State's legislature and ratification by its

Constituent Assembly. The moves on Monday can be seen as an exercise in political optics, pandering to a certain majoritarian sentiment. What the Centre has done is to shred even the garb of democracy and spirit of dialogue that successive governments felt was important to engage the people of Kashmir. Through as many as 45 Presidential Orders, the most critical being the Order of 1954, Article 370 has already been divested of its spirit. Secessionist elements and some Indian Constitutional experts have cited this gradual advance of the Union as the conquest of the Valley by stealth. What even this controversial process of assimilation, with Article 370 in place, has done is to achieve the growth of local political engagement. It legitimises a pan-Indian sentiment in the Valley where the secessionists would like to portray India as a mere occupational force. Indeed, there are several other provisions in the Constitution such as Article 371 (





spardhaguru2022



Spardhaguru Current affairs



Spardhaguru1




SpardhaGuru



Spardha.guru



www.spardha.guru



A), 371(G), 371(B), 371(C) that validate indigenous political forces in States like Nagaland, Mizoram, Assam, Manipur et al. This asymmetric form of federalism has its global parallels in the substantial autonomy enjoyed by Scotland and Wales and Northern Ireland within Great Britain. The protests in Hong Kong affirm the relevance of democratic processes inherent in the one country-two systems followed even by China. By robbing Article 370 of its special provisions, the BJP has undermined these nuanced and extremely critical democratic processes. Simultaneously, the State has been carved up into two Union Territories with J&K having a legislature and Ladakh without it. The unprecedented step of reorganizing a State and divesting it of its legislative authority without even a semblance of consultation with the stakeholders sets a dangerous precedent underlined by several regional groups and political parties, particularly the DMK and the MDMK. It is possible that the BJP would reap rich political dividends for this muscular policy. But the Centre would be responsible for the escalation of violence in the Valley where all doors for political engagement and democratic exchange seem to have been closed down for good. Without meaningful participation of the people, any such unilateral integration can remain at best territorial.

Question 50 :

Which among the following is correct regarding the Article 368 in the Constitution of India, as stated in the passage?

1. It should not go unattended if there is something within the purview of the state and the centre.
2. It should be noted that there are so many issues in the offing so that the central government can come.
3. Any law can be implemented in Jammu and Kashmir only if there is support from the state legislature.
4. The state of Jammu and Kashmir should note that India will not remain spectators in the whole thing.
5. None of the above

Comprehension :

Read the passage carefully and answer the questions that follow. The passage of a statutory resolution and a Bill in Parliament — “abrogating” Article 370 which confers special political status on Jammu and Kashmir, and bifurcating the State into two Union Territories — has robbed the Kashmir Valley of its political autonomy, or whatever remains of it after all these years. It may deepen the State’s trust deficit vis-a-vis the Centre. The “abrogation” of Article 370, being hailed as a “glorious” move, is itself a misnomer. “Amending” or “abrogating” Article 370 is a Constitutional improbability; the amending provision of Article 368 says no Constitutional amendments have effect in relation to J&K unless applied by Order of the President under Article 370 that requires the concurrence of the State’s legislature and ratification by its Constituent Assembly. The moves on Monday can be seen as an exercise in political optics, pandering to a certain majoritarian sentiment. What the Centre has done is to shred even the garb of democracy and spirit of dialogue that successive governments felt was important to engage the people of Kashmir. Through as many as 45 Presidential Orders, the most critical being the Order of 1954, Article 370 has already been divested of its spirit. Secessionist elements and some Indian Constitutional experts have cited this gradual advance of the Union as the conquest of the Valley by stealth. What even this controversial process of assimilation, with Article 370 in place, has done is to achieve the growth of local political engagement. It legitimises a pan-Indian sentiment in the Valley where the secessionists would like to portray India as a mere occupational force. Indeed, there are several other provisions in the Constitution such as Article 371(A), 371(G), 371(B), 371(C) that validate indigenous political forces in States like Nagaland, Mizoram, Assam, Manipur et al. This asymmetric form of federalism has its global parallels in the substantial autonomy enjoyed by Scotland and Wales and Northern Ireland within Great Britain. The protests





spardhaguru2022



Spardhaguru Current affairs



Spardhaguru1




SpardhaGuru



Spardha.guru



www.spardha.guru



in Hong Kong affirm the relevance of democratic processes inherent in the one country-two systems followed even by China. By robbing Article 370 of its special provisions, the BJP has undermined these nuanced and extremely critical democratic processes. Simultaneously, the State has been carved up into two Union Territories with J&K having a legislature and Ladakh without it. The unprecedented step of reorganizing a State and divesting it of its legislative authority without even a semblance of consultation with the stakeholders sets a dangerous precedent underlined by several regional groups and political parties, particularly the DMK and the MDMK. It is possible that the BJP would reap rich political dividends for this muscular policy. But the Centre would be responsible for the escalation of violence in the Valley where all doors for political engagement and democratic exchange seem to have been closed down for good. Without meaningful participation of the people, any such unilateral integration can remain at best territorial.

Question 51 :

Which among the following is correct about Scotland and Wales as stated in the passage?

1. The area comes under the supervision of India whereas the rest of the country does not come here.
2. The area is within suspension by the international territory though other areas are also accepting it.
3. The area enjoys a similar status just like Jammu and Kashmir in India and there are several other areas like this.
4. This area has been in the storm of the dispute between various countries because there are so many problems.
5. None of the above

Comprehension :

Read the passage carefully and answer the questions that follow. The passage of a statutory resolution and a Bill in Parliament — “abrogating” Article 370 which confers special political status on Jammu and Kashmir, and bifurcating the State into two Union

Territories — has robbed the Kashmir Valley of its political autonomy, or whatever remains of it after all these years. It may deepen the State’s trust deficit vis-a-vis the Centre. The “abrogation” of Article 370, being hailed as a “glorious” move, is itself a misnomer. “Amending” or “abrogating” Article 370 is a Constitutional improbability; the amending provision of Article 368 says no Constitutional amendments have effect in relation to J&K unless applied by Order of the President under Article 370 that requires the concurrence of the State’s legislature and ratification by its Constituent Assembly. The moves on Monday can be seen as an exercise in political optics, pandering to a certain majoritarian sentiment. What the Centre has done is to shred even the garb of democracy and spirit of dialogue that successive governments felt was important to engage the people of Kashmir. Through as many as 45 Presidential Orders, the most critical being the Order of 1954, Article 370 has already been divested of its spirit. Secessionist elements and

some Indian Constitutional experts have cited this gradual advance of the Union as the conquest of the Valley by stealth. What even this controversial process of assimilation, with Article 370 in place, has done is to achieve the growth of local political engagement. It legitimises a pan-Indian sentiment in the Valley where the secessionists would like to portray India as a mere occupational force. Indeed, there are several other provisions in the Constitution such as Article 371(A), 371(G), 371(B), 371(C) that validate indigenous political forces in States like Nagaland, Mizoram, Assam, Manipur et al. This asymmetric form of federalism has its global parallels in the substantial autonomy enjoyed by Scotland and Wales and Northern Ireland within Great Britain. The protests in Hong Kong affirm the relevance of democratic processes inherent in the one country-two systems followed even by China. By robbing Article 370 of its special provisions, the BJP has undermined these nuanced and extremely critical democratic





processes. Simultaneously, the State has been carved up into two Union Territories with J&K having a legislature and Ladakh without it. The unprecedented step of reorganizing a State and divesting it of its legislative authority without even a semblance of consultation with the stakeholders sets a dangerous precedent underlined by several regional groups and political parties, particularly the DMK and the MDMK. It is possible that the BJP would reap rich political dividends for this muscular policy. But the Centre would be responsible for the escalation of violence in the Valley where all doors for political engagement and democratic exchange seem to have been closed down for good. Without meaningful participation of the people, any such unilateral integration can remain at best territorial.

Question 52 :

Which among the following is correct regarding the possible consequence of the decision taken by the centre to abrogate Section 370?

1. The people of the area will not understand the importance of autonomy and they will come to India.
2. The people of the area will have more trust deficit with the mainland government of India since they will feel things are not being in their interests.
3. The people in the area will not be within the jurisdiction of the police and the army of the central government.
4. It will have no impact on the population of Jammu and Kashmir though they are yet to know the fact.
5. None of the above

Comprehension :

Read the passage carefully and answer the questions that follow. The passage of a statutory resolution and a Bill in Parliament — “abrogating” Article 370 which confers special political status on Jammu and Kashmir, and bifurcating the State into two Union Territories — has robbed the Kashmir Valley of its political autonomy, or whatever remains of it after all these years. It may deepen the State’s trust deficit vis-a-vis the Centre. The “abrogation” of Article 370,

being hailed as a “glorious” move, is itself a misnomer. “Amending” or “abrogating” Article 370 is a Constitutional improbability; the amending provision of Article 368 says no Constitutional amendments have effect in relation to J&K unless applied by Order of the President under Article 370 that requires the concurrence of the State’s legislature and ratification by its Constituent Assembly. The moves on Monday can be seen as an exercise in political optics, pandering to a certain majoritarian sentiment. What the Centre has done is to shred even the garb of democracy and spirit of dialogue that successive governments felt was important to engage the people of Kashmir. Through as many as 45 Presidential Orders, the most critical being the Order of 1954, Article 370 has already been divested of its spirit. Secessionist elements and some Indian Constitutional experts have cited this gradual advance of the Union as the conquest of the Valley by stealth. What even this controversial process of assimilation, with Article 370 in place, has done is to achieve the growth of local political engagement. It legitimises a pan-Indian sentiment in the Valley where the secessionists would like to portray India as a mere occupational force. Indeed, there are several other provisions in the Constitution such as Article 371(A), 371(G), 371(B), 371(C) that validate indigenous political forces in States like Nagaland, Mizoram, Assam, Manipur et al. This asymmetric form of federalism has its global parallels in the substantial autonomy enjoyed by Scotland and Wales and Northern Ireland within Great Britain. The protests in Hong Kong affirm the relevance of democratic processes inherent in the one country-two systems followed even by China. By robbing Article 370 of its special provisions, the BJP has undermined these nuanced and extremely critical democratic processes. Simultaneously, the State has been carved up into two Union Territories with J&K having a legislature and Ladakh without it. The unprecedented step of reorganizing a State and divesting it of its legislative authority without even a





semblance of consultation with the stakeholders sets a dangerous precedent underlined by several regional groups and political parties, particularly the DMK and the MDMK. It is possible that the BJP would reap rich political dividends for this muscular policy. But the Centre would be responsible for the escalation of violence in the Valley where all doors for political engagement and democratic exchange seem to have been closed down for good. Without meaningful participation of the people, any such unilateral integration can remain at best territorial.

Question 53 :

Which among the following is SIMILAR in meaning to the word 'pandering' as used in the passage?

1. Pondering
2. Figuring
3. Terming
4. Satisfying
5. None of the above

Comprehension :

Read the passage carefully and answer the questions that follow. The passage of a statutory resolution and a Bill in Parliament — “abrogating” Article 370 which confers special political status on Jammu and Kashmir, and bifurcating the State into two Union Territories — has robbed the Kashmir Valley of its political autonomy, or whatever remains of it after all these years. It may deepen the State’s trust deficit vis-a-vis the Centre. The “abrogation” of Article 370, being hailed as a “glorious” move, is itself a misnomer. “Amending” or “abrogating” Article 370 is a Constitutional improbability; the amending provision of Article 368 says no Constitutional amendments have effect in relation to J&K unless applied by Order of the President under Article 370 that requires the concurrence of the State’s legislature and ratification by its Constituent Assembly. The moves on Monday can be seen as an exercise in political optics, pandering to a certain

majoritarian sentiment. What the Centre has done is to shred even the garb of democracy and spirit of dialogue

that successive governments felt was important to engage the people of Kashmir. Through as many as 45 Presidential Orders, the most critical being the Order of 1954, Article 370 has already been divested of its spirit. Secessionist elements and some Indian Constitutional experts have cited this gradual advance of the Union as the conquest of the Valley by stealth.

What even this controversial process of assimilation, with Article 370 in place, has done is to achieve the growth of local political engagement. It legitimises a pan-Indian sentiment in the Valley where the secessionists would like to portray India as a mere occupational force. Indeed, there are several other provisions in the Constitution such as Article 371(A), 371(G), 371(B), 371(C) that validate indigenous political forces in States like Nagaland, Mizoram, Assam, Manipur et al. This asymmetric form of federalism has its global parallels in the substantial autonomy enjoyed by Scotland and Wales and Northern Ireland within Great Britain. The protests in Hong Kong affirm the relevance of democratic processes inherent in the one country-two systems followed even by China. By robbing Article 370 of its special provisions, the BJP has undermined these nuanced and extremely critical democratic processes. Simultaneously, the State has been carved up into two Union Territories with J&K having a legislature and Ladakh without it. The unprecedented step of reorganizing a State and divesting it of its legislative authority without even a semblance of consultation with the stakeholders sets a dangerous precedent underlined by several regional groups and political parties, particularly the DMK and the MDMK. It is possible that the BJP would reap rich political dividends for this muscular policy. But the Centre would be responsible for the escalation of violence in the Valley where all doors for political engagement and democratic exchange seem to have been closed down for good. Without





meaningful participation of the people, any such unilateral integration can remain at best territorial.

Question 54 :

Which among the following is/are correct as per the passage regarding the decision taken by the Government of India to revoke Article 370 of the Indian Constitution? I. Jammu and Kashmir will be a Union Territory with a legislature whereas Ladakh will not have the same. II. This decision will help the separatists in the valley to portray India as a force working against the interests of the valley people. III. This decision will not stand in the court of law and there has already been a petition in the Supreme Court against it.

1. Both I and II

2. Both II and III
3. Both I and III
4. Only III
5. All I, II and III

Comprehension :

Read the passage carefully and answer the questions that follow. The passage of a statutory resolution and a Bill in Parliament — “abrogating” Article 370 which confers special political status on Jammu and Kashmir, and bifurcating the State into two Union Territories — has robbed the Kashmir Valley of its political autonomy, or whatever remains of it after all these years. It may deepen the State’s trust deficit vis-a-vis the Centre. The “abrogation” of Article 370, being hailed as a “glorious” move, is itself a misnomer. “Amending” or “abrogating” Article 370 is a Constitutional improbability; the amending provision of Article 368 says no Constitutional amendments have effect in relation to J&K unless applied by Order of the President under Article 370 that requires the concurrence of the State’s legislature and ratification by its Constituent Assembly. The moves on Monday can be seen as an exercise in political optics, pandering to a certain majoritarian sentiment. What the Centre has done is to shred even the garb of democracy and spirit of

dialogue that successive governments felt was important to engage the people of Kashmir. Through as many as 45 Presidential Orders, the most critical being the Order of 1954, Article 370 has already been divested of its spirit. Secessionist elements and some Indian Constitutional experts have cited this gradual advance of the Union as the conquest of the Valley by stealth. What even this controversial process of assimilation, with Article 370 in place, has done is to achieve the growth of local political engagement. It legitimises a pan-Indian sentiment in the Valley where the secessionists would like to portray India as a mere occupational force. Indeed, there are several other provisions in the Constitution such as Article 371(A), 371(G), 371(B), 371(C) that validate indigenous political forces in States like Nagaland, Mizoram, Assam, Manipur et al. This asymmetric form of federalism has its global parallels in the substantial autonomy enjoyed by Scotland and Wales and Northern Ireland within Great Britain. The protests in Hong Kong affirm the relevance of democratic processes inherent in the one country-two systems followed even by China. By robbing Article 370 of its special provisions, the BJP has undermined these nuanced and extremely critical democratic processes. Simultaneously, the State has been carved up into two Union Territories with J&K having a legislature and Ladakh without it. The unprecedented step of reorganizing a State and divesting it of its legislative authority without even a semblance of consultation with the stakeholders sets a dangerous precedent underlined by several regional groups and political parties, particularly the DMK and the MDMK. It is possible that the BJP would reap rich political dividends for this muscular policy. But the Centre would be responsible for the escalation of violence in the Valley where all doors for political engagement and democratic exchange seem to have been closed down for good. Without meaningful participation of the people, any such unilateral integration can remain at best territorial.



Question 55 :

Which among the following is **SIMILAR** in meaning to the word 'misnomer' as used in the passage?

1. Understanding
2. Utilization
3. **Misleading**
4. Mutual
5. None of the above

Question 56 :

In the following question, a sentence is given with certain words in bold. Choose the pair of such words which need to be interchanged so as to make the sentence grammatically correct and meaningful. There is a perception that the government's fight against crony (A) capitalism, black money, and corruption has led to restrictive (B) economic policies and, worse, a crackdown (C) on businessmen (D).

1. A-D
2. B-C
3. C-D
4. A-B
5. **All are correct**

Question 57 :

If the ratio of length to breadth of a rectangle is 4:3 and the area of the rectangle is 300 cm² then, find the difference between the length and the breadth of the rectangle.

1. 6 cm
2. **5 cm**
3. 7 cm
4. 8 cm
5. 4 cm

Comprehension :

Directions: What will come in place of question mark (?) in the following question?

Question 58 :

$$(576 \div 16) \div 3 = ? \div 2$$

1. 12

2. 36

3. **24**

4. 20

5. 48

Question 59 :

In the given question, four words are printed in bold and are numbered A, B, C, and D. The position of some highlighted words may be incorrect and need to be exchanged with another highlighted word to make the sentence correct. Find the words that need to be exchanged. In case the given sentence is correct, mark option 5 i.e. 'No error' as your answer. The city used to be the extensive, splendid and opulent (A)/ capital of independent retains (B)/ of the same name, but now sovereignty (C)/ only the vestiges of its former grandeur (D).

1. A-D
2. **B-C**
3. A-C
4. C-D
5. No Error

Question 60 :

Five sentences numbered A, B, C, D and E are given below. Four of them can be put together to form a meaningful and coherent short paragraph. Identify the odd one out. A. India's constitution banned caste discrimination and early governments introduced quotas to provide fairer allocation of jobs and education, but caste remains a powerful factor in politics. B. Although the U.S. has been a strong proponent of democracy, it did not invent democracy. C. Another important ancient Greek concept that influenced the formation of the United States government was the written constitution. D. The Greeks are often credited with pioneering a democratic government that went on to influence the structure of the United States. E. Like The Constitution of the Athenians, the U.S. Constitution is a vital document which lays out the government's structure and how the checks and balances of power within it relate to one another.

1. **A**



spardhaguru2022



Spardhaguru Current affairs



Spardhaguru1




SpardhaGuru



Spardha.guru



www.spardha.guru



2. B
3. C
4. D
5. E

Comprehension :

Directions: What will come in place of question mark (?) in the following question?

Question 61 :

$$40\% \text{ of } 475 + 190\% \text{ of } 600 + 1 = ?$$

1. 13
2. 19
3. 12
4. 111
5. 11

Comprehension :

Directions: What will come in place of question mark (?) in the following question?

Question 62 :

$$32 \div 128 \times 1024 \div 8 = ?$$

1. 73
2. 42
3. 84
4. 32
5. 54

Comprehension :

Directions: What will come in place of question mark (?) in the following question?

Question 63 :

$$(1042 + ?) \div 3 = 1816 \div 4$$

1. 442
2. 337
3. 385
4. 320

5. 268

Comprehension :

Directions: What will come in place of question mark (?) in the following question?

Question 64 :

$$(17.28 \div 0.12) \div 3.6 \times 0.2 = ?$$

1. 120
2. 1.20
3. 12
4. 8
5. 1.21

Comprehension :

Directions: What will come in place of question mark (?) in the following question?

Question 65 :

$$88.88\% \text{ of } 243 + 75\% \text{ of } 80 + 14.28\% \text{ of } 56 = ?$$

1. 290
2. 302
3. 281
4. 284
5. 275

Comprehension :

Directions: What will come in place of question mark (?) in the following question?

Question 66 :

$$(27/64)^2 \times (3/4)^2 \times (9/16)^2 \times ? + 1 = (81/256)^3 \times ?$$

1. 1.25
2. 0.75
3. 0.5
4. 1
5. 2.25

Comprehension :





spardhaguru2022



Spardhaguru Current affairs



Spardhaguru1




SpardhaGuru



Spardha.guru



www.spardha.guru



Direction: Read the following information carefully and answer the questions given below. Eight persons - A, B, C, D, E, F, G, and H go to the club in four different months i.e. April, May, June and July on two different dates - 7th and 28th. Not more than one person goes between C and G. A goes on an odd numbered date but not in April and May. Three persons go between A and C. As many persons go before E as same as go after H. D goes immediately before H but in different months. F goes on an even-numbered date before B.

Question 67 :

If E is related to C, B is related to H, then who among the following is related to F?

1. E
2. D
3. **G**
4. H
5. C

Question 68 :

In a certain code language, 'DIAMETER' is written as 'EK BOFVFT', and 'AVIATION' is written as 'BXJCUKPP'. How will 'COMPOUND' be written in that language?

1. PWOFDQNR
2. **DQNRPWOF**
3. OUNDCOMP
4. DPNQPVOE
5. EQORQWPF

Comprehension :

Directions: Study the following arrangement carefully and answer the questions given below. T2H9@PF&D1 NA5*J 8 Z 6 # U S @ G V 4 X % E 3

Question 69 :

How many such letters are there in the above arrangement, each of which is immediately preceded by a symbol and immediately followed by a number?

1. None
2. One
3. Two
4. **Three**
5. More than three

Comprehension :

Directions: Study the following arrangement carefully and answer the questions given below. T2H9@PF&D1 NA5*J 8 Z 6 # U S @ G V 4 X % E 3

Question 70 :

How many symbols are there in the above arrangement which is immediately followed by a number?

1. Three
2. More than three
3. Two
4. One
5. **None**

Comprehension :

Directions: Study the following arrangement carefully and answer the questions given below. T2H9@PF&D1 NA5*J 8 Z 6 # U S @ G V 4 X % E 3

Question 71 :

Which of the following element is the fourth to the right of the one which is sixth from the left end of the above arrangement?

1. D
2. N
3. **1**
4. 6
5. None of these

Comprehension :

Directions: Study the following arrangement carefully and answer the questions given below. T2H9@PF&D1 NA5*J 8 Z 6 # U S @ G V 4 X % E 3





spardhaguru2022



Spardhaguru Current affairs



Spardhaguru1




SpardhaGuru



Spardha.guru



www.spardha.guru



Question 72 :

Which of the following element is the seventh to the left of the one which is eleventh from the right end of the above arrangement?

1. @
2. A
3. 5
4. #
5. None of these

Comprehension :

Directions: Study the following arrangement carefully and answer the questions given below. T2H9@PF&D1NA5*J8Z6#US@GV4X%E3

Question 73 :

If all the symbols are dropped from the above series, then which of the following element is 15th from the right end?

1. F
2. N
3. 9
4. D
5. None of these

Comprehension :

Direction: Read the following information carefully and answer the questions given below. Seven boxes- A, B, C, D, E, F, and G are placed in a stack one above the other. More than three boxes are placed between A and F which is placed below A. Box G is placed three places above box B. Two boxes are placed between F and C. As many boxes are placed above A as same as placed below B. The number of boxes placed below G is one less than the number of boxes placed above box D.

Question 74 :

How many boxes are placed between E and D?

1. Four

2. Three

3. Two

4. One

5. None

Comprehension :

Direction: Read the following information carefully and answer the questions given below. Seven boxes- A, B, C, D, E, F, and G are placed in a stack one above the other. More than three boxes are placed between A and F which is placed below A. Box G is placed three places above box B. Two boxes are placed between F and C. As many boxes are placed above A as same as placed below B. The number of boxes placed below G is one less than the number of boxes placed above box D.

Question 75 :

Which of the following box is placed immediately above Box F?

1. B
2. A
3. E
4. D
5. None of these

Comprehension :

Direction: Read the following information carefully and answer the questions given below. Seven boxes- A, B, C, D, E, F, and G are placed in a stack one above the other. More than three boxes are placed between A and F which is placed below A. Box G is placed three places above box B. Two boxes are placed between F and C. As many boxes are placed above A as same as placed below B. The number of boxes placed below G is one less than the number of boxes placed above box D.

Question 76 :

Which of the following statements is true about box G?

1. Box F is placed immediately below box G





spardhaguru2022



Spardhaguru Current affairs



Spardhaguru1




SpardhaGuru



Spardha.guru



www.spardha.guru



2. Only two boxes are placed above box G
3. More than one box is placed between B and G
4. Box A is placed immediately above box G
5. None is true

Comprehension :

Direction: Read the following information carefully and answer the questions given below. Seven boxes- A, B, C, D, E, F, and G are placed in a stack one above the other. More than three boxes are placed between A and F which is placed below A. Box G is placed three places above box B. Two boxes are placed between F and C. As many boxes are placed above A as same as placed below B. The number of boxes placed below G is one less than the number of boxes placed above box D.

Question 77 :

Four of the following five are alike in a certain way based on the given arrangement and thus form a group. Which of the following does not belong to that group?

1. AE
2. GD
3. FB
4. AC
5. DF

Comprehension :

Direction: Read the following information carefully and answer the questions given below. Seven persons- P, Q, R, S, T, U, and W are going to the hospital for regular checkups on different days of the week starting from Monday to Sunday. P goes either on Monday or Saturday. Neither R nor Q goes on Tuesday. Three persons go between P and T. W goes three days before U. Two persons go between R and Q. Neither S nor W goes on Thursday. At least one person goes between R and T.

Question 78 :

Who among the following go on Wednesday?

1. T
2. W
3. R
4. U
5. None of these

Comprehension :

Direction: Read the following information carefully and answer the questions given below. Seven persons- P, Q, R, S, T, U, and W are going to the hospital for regular checkups on different days of the week starting from Monday to Sunday. P goes either on Monday or Saturday. Neither R nor Q goes on Tuesday. Three persons go between P and T. W goes three days before U. Two persons go between R and Q. Neither S nor W goes on Thursday. At least one person goes between R and T.

Question 79 :

Who among the following goes just before U?

1. P
2. R
3. S
4. T
5. None of these

Comprehension :

Direction: Read the following information carefully and answer the questions given below. Seven persons- P, Q, R, S, T, U, and W are going to the hospital for regular checkups on different days of the week starting from Monday to Sunday. P goes either on Monday or Saturday. Neither R nor Q goes on Tuesday. Three persons go between P and T. W goes three days before U. Two persons go between R and Q. Neither S nor W goes on Thursday. At least one person goes between R and T.

Question 80 :

How many persons go between the one who goes just after P and T?





spardhaguru2022



Spardhaguru Current affairs



Spardhaguru1




SpardhaGuru



Spardha.guru



www.spardha.guru



1. Three
2. More than three
3. One
4. **Two**
5. None of these

Comprehension :

Direction: Read the following information carefully and answer the questions given below. Seven persons- P, Q, R, S, T, U, and W are going to the hospital for regular checkups on different days of the week starting from Monday to Sunday. P goes either on Monday or Saturday. Neither R nor Q goes on Tuesday. Three persons go between P and T. W goes three days before U. Two persons go between R and Q. Neither S nor W goes on Thursday. At least one person goes between R and T.

Question 81 :

Four of the following five are like in a certain way and so form a group. Which of the following does not belong to that group?

1. P- Tuesday
2. W- Thursday
3. T- Saturday
4. **Q- Sunday**
5. S- Wednesday

Comprehension :

Direction: Read the following information carefully and answer the questions given below. Seven persons- P, Q, R, S, T, U, and W are going to the hospital for regular checkups on different days of the week starting from Monday to Sunday. P goes either on Monday or Saturday. Neither R nor Q goes on Tuesday. Three persons go between P and T. W goes three days before U. Two persons go between R and Q. Neither S nor W goes on Thursday. At least one person goes between R and T.

Question 82 :

R goes on which of the following day?

1. Monday
2. Wednesday
3. Friday
4. Tuesday
5. **Sunday**

Comprehension :

Direction: Read the following information carefully and answer the questions given below. Eight persons- A, B, C, D, E, F, G, and H go to the club in four different months i.e. April, May, June and July on two different dates- 7th and 28th. Not more than one person goes between C and G. A goes on an odd-numbered date but not in April and May. Three persons go between A and C. As many persons go before E as same as go after H. D goes immediately before H but in different months. F goes on an even-numbered date before B.

Question 83 :

The number of persons go before F is the same as the number of persons go after ?

1. **A**
2. E
3. D
4. G
5. C

Comprehension :

Direction: Read the following information carefully and answer the questions given below. Eight persons- A, B, C, D, E, F, G, and H go to the club in four different months i.e. April, May, June and July on two different dates- 7th and 28th. Not more than one person goes between C and G. A goes on an odd-numbered date but not in April and May. Three persons go between A and C. As many persons go before E as same as go after H. D goes immediately before H but in different months. F goes on an even-numbered date before B.





spardhaguru2022



Spardhaguru Current affairs



Spardhaguru1




SpardhaGuru



Spardha.guru



www.spardha.guru



Question 84 :

Which of the following information is true about B?

1. 28 June
2. 7 April
3. 7 May
4. **28 July**
5. None of these

Comprehension :

Direction: Read the following information carefully and answer the questions given below. Eight persons - A, B, C, D, E, F, G, and H go to the club in four different months i.e. April, May, June and July on two different dates - 7th and 28th. Not more than one person goes between C and G. A goes on an odd-numbered date but not in April and May. Three persons go between A and C. As many persons go before E as same as go after H. D goes immediately before H but in different months. F goes on an even-numbered date before B.

Question 85 :

How many persons go before D?

1. One
2. Two
3. Four
4. Three
5. **Five**

Comprehension :

Direction: Read the following information carefully and answer the questions given below. Eight persons - A, B, C, D, E, F, G, and H go to the club in four different months i.e. April, May, June and July on two different dates - 7th and 28th. Not more than one person goes between C and G. A goes on an odd-numbered date but not in April and May. Three persons go between A and C. As many persons go before E as same as go after H. D goes immediately before H but in different months. F goes on an even-numbered date before B.

Question 86 :

If all persons go alphabetically from April to July, then how many persons go on the same date and month as before?

1. One
2. Two
3. **None**
4. Three
5. Four

Comprehension :

Direction: In the given statement, the relationship between different elements is shown and it is followed by two conclusions. Choose the correct answer on the basis of the information given below.

Question 87 :

Statements: $CD = EF$, $D > GH$ Conclusions: I. $C > H$ II. GF

1. Only Conclusion I follows
2. Either I or II follows
3. **Only Conclusion II follows**
4. Neither I nor II follows
5. Both I and II follow

Comprehension :

Direction: In the given statement, the relationship between different elements is shown and it is followed by two conclusions. Choose the correct answer on the basis of the information given below.

Question 88 :

Statements: 212019 ; $25 = 2423 > 2221$ Conclusions: I. $24 > 21$ II. 2421

1. Only Conclusion I follows
2. **Either I or II follows**
3. Only Conclusion II follows
4. Neither I nor II follows
5. Both I and II follow

Comprehension :





spardhaguru2022



Spardhaguru Current affairs



Spardhaguru1




SpardhaGuru



Spardha.guru



www.spardha.guru



Direction: In the given statement, the relationship between different elements is shown and it is followed by two conclusions. Choose the correct answer on the basis of the information given below.

Question 89 :

Statements: $STU; U = VW > X$ **Conclusions:** I. $V > S$

II. $U > X$

1. Only Conclusion I follows
2. Either I or II follows
3. Only Conclusion II follows
4. Neither I nor II follows
5. Both I and II follow

Question 90 :

If the letters of the word **STICKER** are arranged in alphabetical order, then which letter is third from the right end?

1. I
2. K
3. R
4. S
5. T

Question 91 :

If it is possible to make only one meaningful word from the 2nd, 4th, 5th, and 11th letters of the word **'INDEPENDENCE'**

using each letter only once, the last letter of the word is your answer. If no such word can be formed, your answer is **'X'**, and if more than one such word can be formed, your answer is **'Y'**.

1. X
2. Y
3. E
4. N
5. P

Comprehension :

Direction: Study the following information carefully and answer the questions accordingly. Archana is going to the office from her home. She moves 12 m

in the east and turns right and moves 6 m after that she turns left and moves 8 m. Again she takes two left turns and moves 8 m and 10 m respectively. She takes a right turn and moves 4 m after that she turns left and moves 10 m. She takes a right turn and moves 2 m after that she turns left and moves 7 m. Finally, she takes a left turn and moves 6 m to reach the office.

Question 92 :

What is the direction of her home from the office?

1. North-east
2. North-west
3. South-east
4. South-west
5. South

Comprehension :

Direction: Study the following information carefully and answer the questions accordingly. Archana is going to the office from her home. She moves 12 m in the east and turns right and moves 6 m after that she turns left and moves 8 m. Again she takes two left turns and moves 8 m and 10 m respectively. She takes a right turn and moves 4 m after that she turns left and moves 10 m. She takes a right turn and moves 2 m after that she turns left and moves 7 m. Finally, she takes a left turn and moves 6 m to reach the office.

Question 93 :

What is the direction of the office with respect to the fifth turn?

1. East
2. West
3. North-east
4. South-west
5. North

Comprehension :

Direction: Study the following information carefully and answer the questions accordingly. Archana is going to the office from her home. She moves 12 m





spardhaguru2022



Spardhaguru Current affairs



Spardhaguru1




SpardhaGuru



Spardha.guru



www.spardha.guru



in the east and turns right and moves 6 m after that she turns left and moves 8 m. Again she takes two left turns and moves 8 m and 10 m respectively. She takes a right turn and moves 4 m after that she turns left and moves 10 m. She takes a right turn and moves 2 m after that she turns left and moves 7 m. Finally, she takes a left turn and moves 6 m to reach the office.

Question 94 :

What is the total distance between the sixth turn and the office?

1. 20 m
2. 22 m
3. 27 m
4. **25 m**
5. 29 m

Comprehension :

Direction: Read the given information carefully and answer the following questions. There are nine members in the family R, S, T, U, V, W, X, Y, and Z with three generations. T is the father of U who is the sister of S. W is the brother-in-law of S who is the father of Y. V is the aunt of Z. W has no sibling. S has only one child. S is the nephew of R who is the sister of T. Z is the grandson of X. There is no single parent in the family.

Question 95 :

Who among the following is the sister-in-law of R?

1. Y
2. **X**
3. V
4. U
5. Z

Comprehension :

Direction: Read the given information carefully and answer the following questions. There are nine members in the family R, S, T, U, V, W, X, Y, and Z with three

generations. T is the father of U who is the sister of S. W is the brother-in-law of S who is the father of Y. V is the aunt of Z. W has no sibling. S has only one child. S is the nephew of R who is the sister of T. Z is the grandson of X. There is no single parent in the family.

Question 96 :

How many male members are there in the family?

1. 2
2. 3
3. 4
4. 5
5. **Can't be determined**

Comprehension :

Direction: Read the given information carefully and answer the following questions. There are nine members in the family R, S, T, U, V, W, X, Y, and Z with three generations. T is the father of U who is the sister of S. W is the brother-in-law of S who is the father of Y. V is the aunt of Z. W has no sibling. S has only one child. S is the nephew of R who is the sister of T. Z is the grandson of X. There is no single parent in the family.

Question 97 :

Which one is odd?

1. W
2. S
3. **V**
4. T
5. Z

Comprehension :

Direction: In the following question three statements are followed by three conclusions numbered I, II, and III. You have to take the given statements to be true even if they seem to be at variance from commonly known facts.





spardhaguru2022



Spardhaguru Current affairs



Spardhaguru1




SpardhaGuru



Spardha.guru



www.spardha.guru



facts. Read all the statements and decide which of the given conclusion/conclusions logically follows from the given statements.

Question 98 :

Statements: Only a few Jeans is Trousers Some Trousers is Pants No Pants is Top **Conclusions:** I. Some Jeans is Pants

II. Some Trouser is not Top III. All Jeans is Top

1. Only Conclusion I follows
2. **Only Conclusion II follows**
3. Only Conclusion III follows
4. Both Conclusions I and II follow
5. All follow

Comprehension :

Direction: In the following question three statements are followed by three conclusions numbered I, II, and III. You have to take the given statements to be true even if they seem to be at variance from commonly known facts. Read all the statements and decide which of the given conclusion/conclusions logically follows from the given statements.

Question 99 :

Statements: Only a few 51 is 52 Some 52 is 53 Only a few 53 is 54 **Conclusions:** I. Some 54 is 51 II. Some 51 is 53 III.

Some 52 is not 54

1. Only Conclusion I follows
2. Only Conclusion II follows
3. All follow
4. Both Conclusion I and II follow
5. **None follows**

Comprehension :

Direction: In the following question three statements are followed by two conclusions numbered I, and II. You have to take the given statements to be true even if they seem to be at variance from commonly known facts. Read all the statements

and decide which of the given conclusion/conclusions logically follows from the given statements.

Question 100 :

Statements: I. Only a few Sun is Moon II. All moon is stars I II. No Star is Planet **Conclusions:** I. Some Sun is star II. No moon is planet

1. Only Conclusion I follows
2. Only Conclusion II follows
3. **Both Conclusions I and II follow**
4. Either Conclusion I or II follows
5. Neither Conclusion I nor II follows

