



spardhaguru2022



Spardhaguru Current affairs



Spardhaguru1




SpardhaGuru



Spardha.guru



www.spardha.guru



Direction: Read the passage given below and answer the following questions.

In today's work environment, one of the key characteristics that companies look for in their employees

is emotional intelligence. Research shows that emotional intelligence counts for twice as much as intelligence and technical skills combined, in determining who will be a key asset to the company. The concept of "emotional intelligence" in the workplace is the ability to understand and manage one's own emotions and understand the emotions of others so that they can on shared goals. Employees who are able to handle their emotions effectively while also understanding the emotional needs of their colleagues can be greatly valuable to any company. According to a recent study, 41% of employees say they feel burned out from work, while 45% say they are emotionally drained. More importantly, around 35% of employees reported experiencing symptoms of depression often at work. Emotional intelligence is one of the qualities that helps maintain a company culture together in such an environment. It helps employees listen to one another, recognize and address problems without being rattled, and approach every situation with genuine concern for the feelings of others. Managers have a significant influence on the workplace and so, they must be the first to understand how their own emotions can affect their colleagues. Emotional intelligence in leaders demonstrates the ability to take responsibility and personal accountability and to step into stressful situations. Companies use a variety of methods to evaluate the emotional intelligence of their employees. Pre-employment assessments allow hiring managers to get the picture of a potential employee's character and interpersonal skills as well as their cognitive and communication skills. A more thorough evaluation can be made by asking candidates about their previous work experience, especially regarding the way they handle various situations at work. Additionally, reference checks with previous

employers or colleagues may be used to gauge the interpersonal interactions of a person. With the increasing automation of jobs, the only roles that cannot be fulfilled by machines will be those jobs that require situational awareness and visualizing the future, which requires an understanding of values and emotions and to empathize with others. In short, technical skills will need to be complemented by strong social and collaboration skills in the workplace.

Que. 1

What word can be used in place of the blank space given in the passage?

1. Corroborate
2. Considerate
3. Collaborate
4. Confiscate
5. Complicate

Que. 2

Which of these words is closest in meaning to the word rattled?

1. Curious
2. Nervous
3. Tired
4. Happy
5. Sleepy

Que. 3

Which of these words means the opposite of complemented?

1. Praised
2. Supported
3. Contrasted
4. Admired
5. Completed

Que. 4

What word can be used instead of the phrase get the picture of?

1. Take a photo





spardhaguru2022



Spardhaguru Current affairs



Spardhaguru1




SpardhaGuru



Spardha.guru



www.spardha.guru



2. Better understand

- Obtain evidence
- Memorize all details
- See through

Que. 5

Which of these statements is true regarding the passage?

- Employees require more salary for their emotional needs.

2. Managers must have better emotional intelligence.

- Managers must never give stressful tasks to employees.
- Leaders should not be personally accountable in the workplace.
- Employees without work experience are unreliable.

Que. 6

Which of these functions cannot be fulfilled by machines?

- Understanding values and emotions
- Having situational awareness
- Visualizing the future
- Empathizing with others
- All of the above

Que. 7

Which of these statements best conveys the tone of the passage according to you?

- More work makes employees more depressed.
- Employees need to let out their emotions at work.
- Better emotional management improves work culture.
- Emotional issues can be reduced by automation.
- Workspace relations are unprofessional.

Que. 8

Which of these words is closest in meaning to the opposite of the phrase burned out?

- Exhausted
- Invigorated
- Overworked
- Tired
- Fatigued

Directions: In this question, a sentence has been divided into five parts (A), (B), (C), (D), and (E). Read the sentence to find out whether there is any grammatical error in it. The error if any, will be in one part of the sentence. If there is no error, the answer is 'No error'. Ignore the error of punctuation if any.

Que. 9

Too often, picnic (A)/ preparation consists (B)/ of throwing together some sandwiches (C)/ and grabbing a apple. (D)/ No error (E)

- A
- B
- C
- D
- E

Directions: In this question, a sentence has been divided into five parts (A), (B), (C), (D), and (E). Read the sentence to find out whether there is any grammatical error in it. The error if any, will

be in one part of the sentence. If there is no error, the answer is 'No error'. Ignore the error of punctuation if any.

Que. 10

The conference will (A)/ give us an opportunity (B)/ to exchange informations (C)/ with other researchers. (D)/ No error (E)

- A
- B
- C
- D
- E





spardhaguru2022



Spardhaguru Current affairs



Spardhaguru1



SpardhaGuru



Spardha.guru



www.spardha.guru



Directions: In this question, a sentence has been divided into five parts (A), (B), (C), (D), and (E). Read the sentence to find out whether there is any grammatical error in it. The error if any, will

be in one part of the sentence. If there is no error, the answer is 'No error'. Ignore the error of punctuation if any.

Que. 11

One of the (A)/ aim of Ethnography is (B)/ to contribute to an understanding (C)/ of the human race. (D)/ No error (E)

1. A
2. **B**
3. C
4. D
5. E

Directions: In this question, a sentence has been divided into five parts (A), (B), (C), (D), and (E). Read the sentence to find out whether there is any grammatical error in it. The error if any, will be in one part of the sentence. If there is no error, the answer is 'No error'. Ignore the error of punctuation if any.

Que. 12

If you will eat (A)/ your breakfast, you (B)/ will be allowed (C)/ to watch television. (D)/ No error (E)

1. **A**
2. B
3. C
4. D
5. E

Direction: The passage given contains blanks, choose the best choice in each case from the words in the options and mark your answer accordingly. Suppose you put \$ 100 in a savings account that earns 10% interest each year, after five years how much will you have? This was a question posed in a

multiple-choice quiz by Standard and Poor's, a rating agency. The answers

----- (1)----- were "less than \$150", "exactly \$150" and "more than \$150". The intention was to test whether respondents----- (2)----- compound interest, in addition to basic mathematics. Alas, not that many did: just one- third of them answered three out of five similar multiple-choice questions--- (3)----- . Scandinavians are the most financially literate: 70% were able to answer three questions; the corresponding figure for Angolans and Albanians was 15%. While education plays a large role in----- (4)----- financial literacy, the link with GDP per person is also remarkably strong. Research shows that in developed countries, knowledge----- (5)----- a U shaped curve with middle-aged adults performing best while in developing countries financial literacy is best among the young. But worryingly many countries remain in a 1960s time warp.

Que. 13

Select the most appropriate option to fill in the blank I

1. volunteer
2. suggest
3. **proffered**
4. compromised
5. guessing

Que. 14

Select the most appropriate option to fill in the blank II

1. familiar
2. comprehension
3. valued
4. decide
5. **understood**

Que. 15

Select the most appropriate option to fill in the blank III

1. truthfully





spardhaguru2022



Spardhaguru Current affairs



Spardhaguru1



SpardhaGuru



Spardha.guru



www.spardha.guru



2. **correctly**

3. flawless
4. precisely
5. instead

Que. 16

Select the most appropriate option to fill in the blank

IV

1. standard
2. **determining**
3. shape
4. discovering
5. participating

Que. 17

Select the most appropriate option to fill in the blank

V

1. follows
2. abides
3. **gained**
4. create
5. develops

Que. 18

Directions: Given below is a word, followed by three sentences that consist of that word. Identify the sentence(s) that express(es) the meaning of the word.

GRAZE

- A.She was referring to the graze on his knee.
B.There is good grassland here for your cattle and horses to graze on.
C.The police grabbed the robbers after a long graze.

1. Only A
2. **Both A and B**
3. Only B
4. Both B and C
5. Only C

Que. 19

Directions: Given below is a word, followed by three sentences that consist of that word. Identify

the sentence(s) that express(es) the meaning of the word.

STOCK

- A.You shouldn't stock at other people's religious beliefs.
B.The value of the company's stock rose by 50% last month.
C.The shop takes stock every week on Friday mornings.

1. Only A
2. Both A and B
3. Only B
4. **Both B and C**
5. Only C

Que. 20

Directions: Given below is a word, followed by three sentences that consist of that word. Identify the sentence(s) that express(es) the meaning of the word.

DROP

- A.Temperatures can drop well below freezing in midwinter.
B.A drop of rain just lighted on his head.
C.Rice is the main drop grown in the area.

1. Only A
2. **Both A and B**
3. Only B
4. Both B and C
5. Only C

Que. 21

In the following sentence, four words have been printed in bold. One of these words might either be wrongly spelt or inappropriate in the context of the sentence. Find out the word that is

inappropriate or wrongly spelt, if any. If the words printed in bold are correctly spelt and appropriate in the sentence context, then mark (5) i.e. 'No error' as your answer.





spardhaguru2022



Spardhaguru Current affairs



Spardhaguru1



SpardhaGuru



Spardha.guru



www.spardha.guru



Citizens should also remember that vaccination certificates will be crucial to return to a new normal, from

accessing public spaces to travel.

1. remember
2. vaccination
3. crucial
4. accessing
5. none of these

Que. 22

In the following sentence, four words or phrases have been printed in bold. One bold part in the sentence is not acceptable in Standard English. Pick up that part and mark its number. If there are no errors in the bold parts, mark (5) i.e. No error as the answer.

The strictest/(A) lockdown declared last year caused untold misery/(B) to the livelihoods of a large number/(C) of workers, particularly in unorganized sectors./(D)

1. strictest
2. misery
3. number
4. sectors
5. No error

Que. 23

In the following question, a sentence is given with phrase or idiom highlighted in bold. Select the correct option given below that can replace the given phrase and mark that as your answer. Ignore the errors of punctuation, if any.

He was able to turn over the promotion without prejudice and applied again several years later.

1. kill two birds with one stone
2. do a brown study
3. make a close shave
4. turn down
5. No improvement required.

Que. 24

Direction: A sentence/part of the sentence is emboldened. Five alternatives are given to the embolden part which will improve the sentence. Choose the correct alternative and choose the option corresponding to it. In case no improvement is needed, click the option corresponding to 'No improvement required'.

No witnesses to the accident have come forward yet, despite the police's appeal.

1. came forward
2. comes forward
3. have come forward
4. has come forward
5. No improvement required

Que. 25

In the following question, a sentence is given with an idiom or phrase highlighted in bold. Select the option given below that replaces the phrase or idiom in bold/underlined and mark that as

your answer. Ignore punctuation errors, if any.

The people who get on in this world are the people who get up and look at the circumstances they want, and if they cannot find them, make them.

1. look out
2. look for
3. look after
4. look forward to
5. No improvement

Que. 26

Directions: Five sentences A, B, C, D, and E are given below, You need to rearrange the sentences so that the five sentences can together form a meaningful paragraph.

A. When I was preparing for my final exams, I decided to study only one subject at a time.

B. I noticed that I could learn something way faster if I immersed myself in it for a few days.





spardhaguru2022



Spardhaguru Current affairs



Spardhaguru1



SpardhaGuru



Spardha.guru



www.spardha.guru



C.Real success happens when we focus on one thing at a time.

D.Most of my peers studied multiple subjects a day.

E.And I only moved on to the next when I fully grasped the material.

Which of the following should be the FIRST sentence after rearrangement?

1. A
2. B
3. C
4. D
5. E

Que. 27

Which of the following should be the SECOND sentence after rearrangement?

1. A
2. B
3. C
4. D
5. E

Que. 28

Which of the following should be the THIRD sentence after rearrangement?

1. A
2. B
3. C
4. D
5. E

Que. 29

Which of the following should be the FOURTH sentence after rearrangement?

1. A
2. B
3. C
4. D
5. E

Que. 30

Which of the following should be the FIFTH sentence after rearrangement?

1. A
2. B
3. C
4. D
5. E

Que. 31

Tarun can row a boat upstream for 27 km in 3 hours and downstream for 99 km in 3 hours. If Tarun rows a distance of 42 km in still water and a distance of 66 km downstream, what is the total time taken?

1. 6 hours
2. 2 hours
3. 5 hours
4. 4 hours
5. 3 hours

Que. 32

In the examination, Raushan got 25% marks and failed by 64 marks. If he had got 40% marks he would have secured 32 marks more than the pass marks. Find the percentage of pass marks in the examination.

1. 30%
2. 35%
3. 40%
4. 45%
5. None of these

Que. 33

An article when sold at a discount of Rs. 100, the shopkeeper earns the profit of 140% and if it is sold at no discount, then profit will be 220%. Find the CP of the article.

1. Rs. 120
2. Rs. 130
3. Rs. 125
4. Rs. 140
5. RS. 145

Que. 34

Simple interest accrued on the amount of Rs.14,000 is Rs. 1260 at the rate of 3 % per annum for t years.





spardhaguru2022



Spardhaguru Current affairs



Spardhaguru1




SpardhaGuru



Spardha.guru



www.spardha.guru



What would be the compound interest accrued on the same amount for the same years at 10 % per annum compounded annually?

1. **Rs.4634**
2. Rs.4458
3. Rs.4534
4. Rs.1256
5. Rs.1675

Que. 35

A and B started business together by investing Rs. 45,000 in ratio of 2 : 3. If after 3 months C invests Rs. 30,000 then what would be the ratio of their profit sharing at end of one year (A : B : C)?

1. 6 : 4 : 5
2. 5 : 4 : 6
3. 4 : 6 : 4
4. 4 : 5 : 6
5. **4 : 6 : 5**

Que. 36

Directions: Study the table carefully and solve the following questions:

In the table, the number of patients who recovered from Covid-19 in four States – Rajasthan, Madhya Pradesh, Uttar Pradesh and Punjab in four Months - February, March, April, May 2021 is given.

Months (Year - 2021)	States			
	Rajasthan	Madhya Pradesh	Uttar Pradesh	Punjab
February	200	270	290	175
March	220	120	250	275
April	150	190	240	225
May	130	220	220	125

What is the ratio of total number of patients recovered from covid-19 in April to total number of patients recovered from covid-19 in March?

1. 161 : 171
2. 161 : 151

3. 173 : 161
4. **161 : 173**
5. None of these

Que. 37

In which state, the number of patients who recovered from covid-19 steadily decreasing?

1. **Uttar Pradesh**
2. Madhya Pradesh
3. Rajasthan
4. Punjab
5. Rajasthan and Uttar Pradesh together

Que. 38

What is the average number of patients who recovered from Covid-19 in Madhya Pradesh in four months?

1. 120
2. 150
3. **200**
4. 220
5. None of these

Que. 39

Find the difference between the total number of patients recovered from Covid-19 in all months in Punjab and the total number of patients recovered from Covid-19 in all months Rajasthan.

1. 70
2. 80
3. 90
4. **100**
5. None of these

Que. 40

In February 2021 the number of patients recovered from Covid-19 in Punjab is how much approximat percent more/less than the number of patients recovered from Covid-19 Uttar Pradesh in the same month?

1. 35%





spardhaguru2022



Spardhaguru Current affairs



Spardhaguru1




SpardhaGuru



Spardha.guru



www.spardha.guru



2. 40%

3. 45%

4. 50%

5. 55%

Que. 41

What will come in the place of the question mark '?' in the following question?

$$\sqrt{(\sqrt{8100} + \sqrt{6241})} = ?$$

1. 14

2. 16

3. 19

4. 13

5. None of these

Que. 42

What will come in place of question mark (?) in the following equation? $(15/11) \times 143 + 30 = ?^2$

1. 12

2. 25

3. 10

4. 8

5. 15

Que. 43

What value should come in the place of (x) in the following question? $25\% \text{ of } 48 + 20\% \text{ of } x = 60$

1. 120

2. 240

3. 360

4. 180

5. 280

Que. 44

What will come in the place of the question mark '?' in the following question? $125 \times 24 + 60\% \text{ of } 660 = 4 \times ?$

1. 759

2. 829

3. 849

4. 750

5. 730

Que. 45

What will come in the place of the question mark '?' in the following question? $20\% \text{ of } 340 \times 30 \div 15 = ?$

1. 136

2. 126

3. 146

4. 156

5. 116

Que. 46

What will come in the place of the question mark '?' in the following question? $78 \times 2 - 56 + 78 = ?$

1. 130

2. 178

3. 168

4. 100

5. 134

Que. 47

What will come in the place of the question mark '?' in the following question? $45 \times 240 \div 24 - 19 = ?$

1. 420

2. 431

3. 400

4. 410

5. 421

Que. 48

What will come in the place of the question mark '?' in the following question? $(23 \times 56 \div 7 + 12) - ? = 200$

1. 6

2. 10

3. -4

4. 2

5. 11

Que. 49

What will come in the place of the question mark '?' in the following question?

$$? \div 13 + 23 \times 12 = 290$$

1. 190

2. 172





spardhaguru2022



Spardhaguru Current affairs



Spardhaguru1



SpardhaGuru



Spardha.guru



www.spardha.guru



3. 192

4. **182**

5. 180

Que. 50

What will come in place of question mark (?) in the following equation? $20\% \text{ of } 500 \div ? + [40\% \text{ of } 400] = 164$

1. 5

2. 125

3. 50

4. 75

5. **25**

Que. 51

What will come in place of question mark (?) in the following equation? $23^2 - 245 \div 35 = ? \times 18$

1. 31

2. 52

3. 45

4. 39

5. **29**

Que. 52

What will come in place of question mark (?) in the following equation? $5^3 + 25 \times 8 = ? + 12 \times 5$

1. **265**

2. 225

3. 245

4. 255

5. 235

Que. 53

What will come in place of question mark (?) in the following equation? $12 - [3 - \{6 - (15 - 7)\}] = ?$

1. 4

2. **7**

3. 11

4. 15

5. 2

Que. 54

What will come in place of question mark (?) in the following equation? $(32 \times 9) \div 18 + 5^2 = ?$

1. 31

2. 33

3. **41**

4. 43

5. 47

Que. 55

What will come in place of question mark (?) in the following equation? $(22 \times 15 - 150) - 164 = \sqrt{?}$

1. 4

2. 12

3. 16

4. **256**

5. 128

Que. 56

Direction: Study the direction and answer the following questions.

In a summer festival which was held in Shimla, there were 4000 visitors. 25% of the total number of

visitors are unemployed and out of these 20% are females. 12.5% of the total number of visitors are doctors and out of these 50% are females. 25% of the total number of visitors are teachers out of which 82.5% are males.

There are 1500 engineers present at the festival and the ratio of males and females is 8 : 7.

What is the ratio between the number of unemployed males present at the festival to the number of female engineers present at the festival?

1. 2 : 3

2. 3 : 5

3. **8 : 7**

4. 5 : 7

5. 15 : 7

Que. 57





spardhaguru2022



Spardhaguru Current affairs



Spardhaguru1




SpardhaGuru



Spardha.guru



www.spardha.guru



Female teachers present at the festival is what percentage more or less than the number of female doctors present at the festival?

1. 50%
2. **30%**
3. 20%
4. 10%
5. 15%

Que. 58

What is the difference between the number of male doctors and the number of male unemployed together and the number of female unemployed and female doctors together?

1. 400
2. **600**
3. 200
4. 500
5. 100

Que. 59

In the given question, two equations numbered I and II are given. Solve both the equations and mark the appropriate answer.

I. $x^2 - 26x + 165 = 0$

II. $y^2 - 38y + 357 = 0$

1. $x > y$
2. **$x < y$**
3. $x \geq y$
4. $x \leq y$
5. $x = y$ or relationship between x and y cannot be established.

Que. 60

In the given question, two equations numbered I and II are given. Solve both the equations and mark the appropriate answer.

I. $x^2 + 36x + 180 = 0$

II. $y^2 - 18y - 144 = 0$

1. $x \geq y$
2. **$x \leq y$**
3. $x > y$
4. $x < y$

5. $x = y$ or the relationship between x and y cannot be established.

Que. 61

If the ratio of alcohol and water in a mixture of 85 litres is 11 : 6. How much water should be added to make the ratio 5 : 3?

1. 2 litres
2. **3 litres**
3. 4 litres
4. 5 litres
5. 6 litres

Que. 62

A tank is filled in 8 hours by three taps A, B and C. The tap C is thrice as fast as B and B is twice as fast as A. How much time will pipe B alone take to fill the tank?

1. **36 hours**
2. 40 hours
3. 45 hours
4. 50 hours
5. None of these

Que. 63

If the difference between the perimeter of a square field A and its side is 48 cm. Side of square field B is 4 cm less than the side of square field A. Then, find the area of square field B.

1. 122 cm^2
2. 134 cm^2
3. 156 cm^2
4. **144 cm^2**
5. 124 cm^2

Que. 64

If the ratio of the first to second number is 3 : 4 and that of the second to the third number is 8 : 5, and sum of three numbers is 190 then the third number is:





spardhaguru2022



Spardhaguru Current affairs



Spardhaguru1




SpardhaGuru



Spardha.guru



www.spardha.guru



1. **50**
2. 40
3. 55
4. 65
5. None of these

Que. 65

Rishu deposited an amount of Rs. 950 at Compound Interest. The amount gets doubled of itself after 4 years. What will be the amount after 12 years?

1. Rs. 8600
2. **Rs. 7600**
3. Rs. 7700
4. Rs. 6600
5. None of these.

Que. 66

Direction: Study the information given below carefully and answer the questions that follow.

Amit starts walking from a point A, he walks 10 m towards East and stops at point B. He takes a right turn, walks 10 m and stops at point C. He then takes a right turn again, walks 5 m and stops at point D. He again takes a right turn, walks another 5 m and stops at point E. He finally takes a left turn, walks 5 m and stops at the end point F which is his destination.

In which direction is Amit facing at point F?

1. South
2. North
3. East
4. **West**
5. North-West

Que. 67

What is the distance between the starting point and the end point?

1. 2 m
2. 3 m
3. 4 m
4. **5 m**
5. 6 m

Que. 68

In which direction is Amit facing when he reaches point C?

1. **South**
2. North
3. South-West
4. South-East
5. West

Que. 69

In which direction is point D with respect to point F?

1. South
2. **South-East**
3. South-West
4. West
5. East

Que. 70

If it is possible to make only one meaningful English word with the second, the fourth, the fifth, and the sixth letters of the word RATHER, which of the following will be the fourth of that word? If no

such word can be made give 'X' as the answer and if more than one such word can be made give 'Y' as the answer.

1. A
2. E
3. R
4. X
5. **Y**

Que. 71

How many pairs of letters are there in the word "PRESTIGE" that has as many letter in between them in the word as in alphabet.

1. One
2. Two
3. **Three**
4. Four
5. Five

Que. 72





spardhaguru2022



Spardhaguru Current affairs



Spardhaguru1



SpardhaGuru



Spardha.guru



www.spardha.guru



Directions: Study the following information carefully and answer the questions given below:
Seven students J, K, L, M, N, O and P takes admission in a SCHOOL in seven different days viz.,

Monday to Sunday of a week but not necessarily in the same order. Two students take admission between K and

N. K takes admission before N. O takes admission in one of the day after M. J takes admission on Wednesday. Only one student takes admission between J and M. L takes admission before M and after K. P does not take admission on Sunday.

Which of the following is not true?

1. K takes admission on Monday
2. N takes admission immediately after J
3. **Three persons take admission after M**
4. Both 1 and 2 are true
5. All are not true

Que. 73

Which of the following combination is correct

1. **K – Monday**
2. L – Sunday
3. M – Saturday
4. N – Friday
5. O – Tuesday

Que. 74

Who takes admission on Friday?

1. K
2. L
3. **M**
4. N
5. P

Que. 75

How many persons take admission between K and O?

1. Three
2. Two
3. None
4. One

5. More than three

Que. 76

N takes admission in which of the following days?

1. Monday
2. Wednesday
3. **Thursday**
4. Saturday
5. Tuesday

Que. 77

Directions:- These questions are based on the following information

There are eight people - A, B, C, D, E, F, G and H in the family. There are three generation in the family and three married couples. C is the mother of F, who is the only child. G has only two children and has only one female child. E is the mother of B. B is the paternal aunt of F. D is the grandchild of G. H has no siblings and is married.

Who is the father of F?

1. G
2. **A**
3. E
4. H
5. C

Que. 78

How is F related to E?

1. Grandson
2. Daughter
3. Granddaughter
4. **Either (1) or (3)**
5. Son

Que. 79

How is H related to G?

1. Brother
2. Son
3. Brother in Law
4. Daughter
5. **Son in Law**





spardhaguru2022



Spardhaguru Current affairs



Spardhaguru1



SpardhaGuru



Spardha.guru



www.spardha.guru



Que. 80

Direction: Study the given information carefully and answer the questions.

The family consist of seven members A, B, C, D, E, F, G are of different ages and arranged them from the highest age to youngest. Consecutively arranged person's age difference is only 3.

E is not the youngest among all but is younger than D whose age is not 55. The age of B is 61 and is older than

A. The age of the youngest person is 46 and the age of G is less than 52. A is older than E and D but A's age is not 55.

Who is third oldest among them?

1. D
2. B
3. F
4. **A**
5. C

Que. 81

Who among the following person's age is 55?

1. G
2. F
3. A
4. C
5. **Either 2 or 4**

Que. 82

Who is the youngest person?

1. C
2. **G**
3. D
4. A
5. F

Que. 83

How many person(s) is/are younger to D?

1. One
2. None
3. Three
4. **Two**
5. Either 2 or 3

Que. 84

What is the age of A?

1. 64
2. 55
3. **58**
4. 49
5. None of these

Que. 85

Directions: Study the following arrangement carefully and answer the questions given below:

% E 6 & F G H 9 a 1 V 8 F β 1 ! A 2 @ B 3 # C 4 \$ D 5
€ T M 9 W X Z

How many such symbols are there in the above arrangement each of which are immediately preceded by an odd number and followed by an alphabet?

1. None
2. Two
3. One
4. **Three**
5. More than three

Que. 86

If all the alphabets in the above arrangement are dropped, then which of the following element will be the fifth from the right end?

1. \$
2. **4**
3. #
4. 3
5. 2

Que. 87





spardhaguru2022



Spardhaguru Current affairs



Spardhaguru1




SpardhaGuru



Spardha.guru



www.spardha.guru



How many such vowels are there in the above arrangement each of which is immediately followed by a consonant but not immediately preceded by a number?

1. **None**
2. One
3. Two
4. Three
5. More than three

Que. 88

Four of following five are alike in a certain way based on their positions in the above arrangement and so form a group. Which is the one that does not belong to that group?

1. E & G
2. 2 B #
3. **C 3 @**
4. F H a
5. M W Z

Que. 89

Which of the following is the fifteenth to the right of the twenty - fifth element from the right end of the above arrangement?

1. **\$**
2. 9
3. G
4. F
5. 1

Que. 90

Direction: Read the following information carefully and answers the given question:

Eight people i.e. P, Q, R, S, T, U, V and W are living in a four-storey building, but not necessarily in

the same order. The floor is numbered 1 to 4 from bottom to top. Each floor consists of two flats Flat 1 and Flat

2. Flat 1 is situated to the immediate left of Flat
2. Every person lives in each flat.

R and S live on the same floor but above the floor on which P lives. Q and R live in the same flat on different floors. P and V do not live in the same flat on different floors. P lives on an odd-numbered floor but he does not live on the ground floor. U lives below the floor on which V lives. W does not live with P on the same floor. T does not live to the immediate right of P. V lives on an even-numbered floor just above Q in the same flat of different floors.

Who lives on the Flat 2 of Floor 2?

1. U
2. S
3. P
4. R
5. **W**

Que. 91

Which two people live on floor 1?

1. P, U
2. Q, S
3. T, V
4. **Q, U**
5. W, R

Que. 92

Which of the following combination is true?

1. Floor 4 - Flat 1 - S
2. **Floor 2 - Flat 1 - V**
3. Floor 1 - Flat 2 - W
4. Floor 3 - Flat 2 - T
5. Floor 1 - Flat 1 - V

Que. 93

How many floors are there between U and S?

1. **Two**
2. Three
3. One
4. None
5. None of these

Que. 94

Which of the following person lives on flat 2?





spardhaguru2022



Spardhaguru Current affairs



Spardhaguru1



SpardhaGuru



Spardha.guru



www.spardha.guru



1. U
2. S
3. P
4. W
5. **All of these**

Que. 95

In a certain code language, 'TREAT' is coded as 'WOHXW'. How is 'PARTY' written in that code language?

1. RCTVA
2. YTRAP
3. SXTQB
4. OZQX
5. **SXUQB**

Que. 96

Direction: Study the following information carefully and answer the given questions. In a certain code language, 'gi pa ni' means 'Nature is beautiful', 'da pa zi' means 'She is intelligent', 'sa ji ko' means 'kids are playing', 'da ae ni sa' means 'She has beautiful kids'.

Which of the following means 'Nature' in that code language?

1. **gi**
2. sa
3. zi
4. ko
5. ae

Que. 97

Which word is coded as 'ni' in the given language?

1. Nature
2. are
3. She
4. kids
5. **beautiful**

Que. 98

What would be the code for 'intelligent kids'?

1. da pa

2. **zi sa**
3. ga te
4. ni sa
5. zi ji

Que. 99

What does 'sa ae ni gi' mean in that code language?

1. She is playing beautiful
2. Nature is playing beautiful
3. **kids has beautiful Nature**
4. intelligent kids are playing
5. kids are playing beautiful

Que. 100

If 'Life is beautiful' is coded as 'ta pa ni', what would be the code for 'intelligent Life'?

1. zi pa
2. ko ni
3. ji ta
4. **zi ta**
5. te ni

