



spardhaguru2022



Spardhaguru Current affairs



Spardhaguru1



SpardhaGuru



Spardha.guru



www.spardha.guru



Read the following passage carefully and answer the questions given below it. Certain words have been highlighted for your attention.

Boredom comes in a period of thought where none of my interests are being consciously struck. It's a selfish concept so to speak. Ideally, as individuals, we would never be bored if we found happiness in all things. Everyone has their own interests and their own tastes. That's a simple phrase that almost everyone knows, but in the grand scheme of things, it means a lot. This freedom of self-concept is the window for boredom to arise. When I am happy with what I am doing, I am not bored. However, even happiness has its limits. I only want to do things for so long before I grow tired of them.

The sensation of boredom is described as feeling weary because one is unoccupied or lacks interest in one's current activity or environment. In 1980 Robert Plutchik created the wheel of emotions. It consisted of 8 basic emotions — anger, fear, sadness, disgust, surprise, anticipation, trust, and joy. Robert's model made connections the idea of an emotion circle and a color wheel. Like colors, the primary emotions can be expressed at different levels of intensity and can be mixed with one another to form different emotions that one may feel.

Life, itself, existing might not be enough to conquer boredom. The slow process of enlarging a hole by repetitive movements is called boring. This may be why things, that are slow and repetitive that don't appear to be going anywhere, came to be described as the same word, these things are boring. Boredom, which means being temporarily uninterested in anything happening, has been found as far back as ancient Pompeii. Boredom is a feeling we, as humans, don't like, and it happens to everyone. But now we have Facebook, Youtube, Google, and iPhone games to keep ourselves occupied. So why do we get bored and why is boredom important? Although boredom seems trivial to humans, boredom is actually exciting because it is the most unique emotion of all.

1) What will fit in the blank taken from the passage. "Robert's model made connections the idea of an emotion circle and a color wheel."

1. Among
2. **Between**
3. Around
4. Against
5. To

2) Choose the synonym of the word 'anticipation'.

1. **Expectation**
2. Ignorance
3. Amazement
4. Doubt
5. Fear

3) Choose the antonym of the word 'happiness'.

1. Beatitude
2. Bliss
3. Felicity
4. Joy
5. **Misery**

4) Which of the following is true according to the given passage:

- I. The sensation of boredom is described as feeling weary because one is unoccupied or lacks interest in one's current activity or environment.
- II. The freedom of self-concept is the window for boredom to arise.
- III. The slow process of enlarging a hole by repetitive movements is called happiness.

1. Only I
2. II and III
3. I and III
4. **I and II**
5. None of the above

5) What did Robert Plutchik created?

1. **The wheel of emotions**
2. The time machine
3. The cart of emotion
4. Ways to kill boredom





spardhaguru2022



Spardhaguru Current affairs



Spardhaguru1



SpardhaGuru



Spardha.guru



www.spardha.guru



5. The wheel of colors

6) What is the theme of the passage?

1. Wheel of emotion
2. Happiness in life
3. **Boredom is not boring**
4. Things to conquer in life
5. Different phases of life

7) Which of the following is false according to the given passage:

- I. When I am happy with what I am doing, I am not bored.
 - II. It consisted of 8 basic emotions — anger, fear, sadness, disgust, surprise, anticipation, trust, and joy.
 - III. Life, itself, existing is enough to conquer boredom.
1. I and II
 2. I and III
 3. **Only III**
 4. Only II
 5. None of the above

8) What is the synonym of the word 'grand'?

1. **Imperial**
2. Unimposing
3. Humble
4. Unimpressive
5. None of the above

9) Below a word is given followed by three sentences which consist of that word. Identify the sentence/s which best expresses the meaning of the word. Choose option 5 (None of these) if the word is not suitable in any of the sentences.

CALLOUS

- A. Most small business employers aren't callous mongrels who sack workers unfairly or at the drop of a hat to gain a sense of power.
- B. Treating people like pawns and playthings in your own private emotional board game is cruel and callous.

C. History paintings had to be grand and callous, with subjects drawn from the Bible, classical mythology and history.

1. Only C
2. Only A
3. **Both A and B**
4. Both B and C
5. None of these

10) Directions: Given below is a word, followed by three sentences that consist of that word. Identify the sentence(s) that express(es) the meaning of the word.

SCALE

- A. We shall be making the product on a large scale next year.
 - B. She has a scale complexion.
 - C. The ruler has one scale in centimeters and one scale in inches.
1. Only A
 2. Both A and B
 3. Only B
 4. **Both A and C**
 5. Only C

11) Directions: Given below is a word, followed by three sentences that consist of that word. Identify the sentence(s) that express(es) the meaning of the word.

ISSUE

- A. He has taken a public stand on the issue of misuse of hospital funds.
 - B. She wiped her nose with a issue.
 - C. The authorities have begun to issue ration cards.
1. Only A
 2. Both A and B
 3. Only B
 4. **Both A and C**
 5. Only C

Directions: Select the most appropriate word to fill in the blank.





spardhaguru2022



Spardhaguru Current affairs



Spardhaguru1




SpardhaGuru



Spardha.guru



www.spardha.guru



12) The long-term----- of AAP is to replace Congress as the alternative pole to the BJP.

1. **Strategy**

2. Tragedy
3. Prodigy
4. Analogy
5. Allergy

Directions: Select the most appropriate word to fill in the blank.

13) Bangladesh has also----- as a top exporter in a cost-competitive global market.

1. Chosen
2. Worsen
3. **Risen**
4. Lessen
5. Loosen

Directions: The given question has one blank indicating that something has been omitted. Choose the word for the given options that could fit in the blank correctly.

14) The whole scheme was----, to fail from the beginning.

1. **destined**
2. uncertain
3. decided
4. remote
5. erroneous

15) The excess water started-----forcefully through the waterway.

1. stopped
2. going
3. beginning
4. **flowing**
5. setting

16) Its current was very-----and could take away big tree trunks.

1. compelling
2. **powerful**

3. powerless
4. gentle
5. persuasive

17) Arrange the following parts of a sentence in the correct order and mark the correct option.

- A. done to pacify the
- B. wouldn't damage
- C. spirits so that they
- D. the crops or cause anyone grief
- E. these sacrifices were

1. **EACBD**
2. EDCAB
3. BACDE
4. ADCBE
5. BCADE

18) Arrange the following parts of a sentence in the correct order and mark the correct option.

- A. couldn't hit a
- B. she had a laser
- C. target two feet
- D. gun, even if she
- E. in front of her

1. **BDACE**
2. BADEC
3. ADEBC
4. CDABE
5. EDBAC

19) Arrange the following parts of a sentence in the correct order and mark the correct option.

- A. found his copy
- B. of the bicycle
- C. he fished around until he
- D. at the Byrne home.
- E. magazine he'd seen

1. DEABC
2. ABCDE
3. **CABED**
4. CABDE
5. CDABE





spardhaguru2022



Spardhaguru Current affairs



Spardhaguru1



SpardhaGuru



Spardha.guru



www.spardha.guru



Direction: In the following question, arrange the jumbled words or phrases to make a meaningful sentence.

20) P. five star hotel to stay during our visit / Q. we went in a / R. to Mumbai where I asked only for / S. bread and butter as breakfast /

1. QSRP
2. PQRS
3. SRPQ
4. QPRS
5. RPRQ

DIRECTION: In the following question, parts of a sentence have been jumbled and labelled as P, Q, R, and S. You are required to rearrange the jumbled parts of the sentence and mark your response accordingly by selecting the correct option.

21) P. are not allowed / Q. players / R. to change to a different position / S. unless there is a special requirement

1. SPRQ
2. QPRS
3. SQPR
4. RQSP
5. PQRS

Directions: In the following sentence, five words are given in bold, out of which one word is misspelled. Find the misspelled word.

22) Mr. Putin's purported(A) objective of ensuring(B) the security(C) of his country(D) will not be acheived(E).

1. A
2. B
3. C
4. D
5. E

Directions: In the following sentence, four words are given in bold, out of which one word is misspelled. Find the misspelled word.

23) It is a big blow for family(A) members to return without(B) being granted a meeting(C) after having incurred the necessary(D) time, travel, and other expanses(E).

1. A
2. B
3. C
4. D
5. E

In the following question, a sentence is given with four words marked as (A), (B), (C) and (D).

These words may or may not be placed in the correct order. Four options with different arrangements of these words have been provided. Mark the option with the correct arrangement as the answer. If no rearrangement is required, mark option (5) as your answer.

24) The minister was not the pretended(A) man he virtuous(B) to be and was soon discharged(C) from his position because of immoral(D) behaviour.

1. A-C
2. C-D
3. A-B
4. B-C
5. No rearrangement

In the following question, a sentence is given with four words marked as (A), (B), (C) and (D). These words may or may not be placed in the correct order. Four options with different arrangements of these words have been provided. Mark the option with the correct arrangement as the answer. If no rearrangement is required, mark option (5) as your answer.

25) Known for his audience(A) comebacks, the comedian's amusing(B) stand-up routine(C) is a hit with every witty(D).

1. A-C





spardhaguru2022



Spardhaguru Current affairs



Spardhaguru1




SpardhaGuru



Spardha.guru



www.spardha.guru



2. C-D

3. B-D

4. **A-D**

5. No rearrangement

Directions: Five sentences A, B, C, D, and E are given below, you need to rearrange the sentences so that the five sentences can together form a meaningful paragraph.

A. We breathe polluted air, drink polluted water and eat polluted food.

B. Rising pollution is a very big problem for us.

C. The question is rising how can we protect ourselves from this enemy.

D. It is producing health challenges for all.

E. Pollution produces many health challenges not only for all creatures but also for our environment.

26) Which of the following should be the FIRST sentence after rearrangement?

1. A

2. **B**

3. C

4. D

5. E

27) Which of the following should be the SECOND sentence after rearrangement?

1. A

2. B

3. C

4. **D**

5. E

28) Which of the following should be the THIRD sentence after rearrangement?

1. **A**

2. B

3. C

4. D

5. E

29) Which of the following should be the FOURTH sentence after rearrangement?

1. A

2. B

3. C

4. D

5. **E**

30) Which of the following should be the FIFTH sentence after rearrangement?

1. A

2. B

3. **C**

4. D

5. E

31) A man buy two watches at Rs.4000. He sold one watch at 20% profit and second at 10% loss. In this transaction the overall profit or loss will be 5%. Find the cost price of first watch.

1. **Rs.2000**

2. Rs.3000

3. Rs.2500

4. Rs.2300

5. Rs.2400

32) In a mixture of 156 litres, the ratio of milk and water is 7 : 6. How much water should be added to make the ratio 14 : 13?

1. 5 liters

2. 16 litres

3. 60 litres

4. **6 litres**

5. 4 litres

33) A train travelling at a speed of 72 km/hr crosses a post in 20 seconds. If it crosses another train travelling at a speed of 54 km/hr in the same direction in 1 minute 45 seconds, then the difference in length between the two trains is

1. **275 m**

2. 225 m

3. 125 m





spardhaguru2022



Spardhaguru Current affairs



Spardhaguru1




SpardhaGuru



Spardha.guru



www.spardha.guru



4. 175 m
5. 200 m

34) The average mark of 13 papers is 80. The average marks of the first 7 papers are 84 and that of the last 7 papers is 70. Find the marks obtained in the 7th paper.

1. 28
2. 19
3. 40
4. 42
5. **38**

35) In an election two candidates participated, the winner got 60% of the total valid votes, 30% of the votes were declared as invalid. If the total number of votes was 8000, the number of valid votes that the other candidate got was.

1. 2440
2. 2140
3. 2340
4. **2240**
5. 2540

36) What will come in place of question mark (?) in the following number series? 2, 5, 11, 23, 44, 77, ?

1. 48
2. 150
3. **125**
4. 92
5. None of these

37) What will come in place of question mark (?) in the following number series? 31, 32, 36, ?, 61, 86

1. **45**
2. 54
3. 51
4. 48
5. None of these

38) What will come in the place of question mark (?) in the following number series? 3, 6, 18, ?, 630, 6930

1. 60
2. 75
3. **90**
4. 105
5. 250

39) What should come in place of the question mark '?' in the following number series? 60, 40, 50, ?, 180, 460

1. 75
2. 95
3. 65
4. **85**
5. None of these

40) What will come in place of question mark (?) in the following number series? 13, 14, 30, ?, 376, 1885

1. 45
2. 35
3. 32
4. **93**
5. None of these

41) What will come in the place of the question mark '?' in the following question? $(15 + 24) \times 3 \div 13 + 18 - 5 = ?$

1. 25
2. 32
3. **22**
4. 17
5. 19

42) What should come in place of the question mark '?' in the following question? $13 \times 3 \text{ of } 5 \div 26 = ? + 2.5$

1. 7
2. 6
3. 4
4. **5**





spardhaguru2022



Spardhaguru Current affairs



Spardhaguru1



SpardhaGuru



Spardha.guru



www.spardha.guru



5. None of these

2. 5

3. 6

4. 7

5. 8

43) What should come in place of the question mark '?' in the following question? $10\% \text{ of } 450 - (8 \times 5) = ? \times 5$

1. 8.2

2. 2

3. 1

4. 5

5. None of these

48) What will come in the place of the question mark '?' in the following question? $(1111 \div 11) - (650 \div 25) = 15 \times ?$

1. 5

2. 3

3. 90

4. 60

5. 4

44) What will come in the place of the question mark '?' in the following question? $(66)^2 - (34)^2 + ?^2 = (60)^2$

1. 400

2. 40

3. 20

4. 30

5. 15

49) What will come in the place of the question mark '?' in the following question? $15 \times 3 + 7 \times ? + 24 \div 6 \times 2 = 60$

1. 5

2. 4

3. 3

4. 2

5. 1

45) What will come in the place of the question mark '?' in the following question? $3 \times ? \div 9 = \sqrt[3]{729} \times \sqrt{121}$

1. 197

2. 300

3. 297

4. 295

5. None of these

50) What will come in the place of the question mark '?' in the following question? $(700 + 800 - 1300 + 800) \div ? = 200$

1. 5

2. 4

3. 3

4. 6

5. 7

46) What will come in the place of the question mark '?' in the following question?

$\sqrt[3]{3375} \times 75\% \text{ of } 400 = ?/2$

1. 8000

2. 7000

3. 9000

4. 5000

5. 4000

51) What value should come in place of questions (?) in the following equations? $56 \times 15 \div 3 - 83 = ? - 139$

1. 314

2. 334

3. 316

4. 336

5. None of these

47) What will come in the place of the question mark '?' in the following question? $225 \div 25 \times 9 - 3 \times ? = 60$

1. 4





spardhaguru2022



Spardhaguru Current affairs



Spardhaguru1




SpardhaGuru



Spardha.guru



www.spardha.guru



52) What will come in the place of the question mark '?' in the following question? $20 \times 168 \div 14 - 40 = ? + 110$

1. 60
2. 30
3. 40
4. 80
5. **90**

53) What will come in place of the question mark (?) in the following question? $12 + 12 \times 10 \div 5 = ?$

1. **6**
2. 5
3. 10
4. 7
5. 8

54) What will come in the place of question mark (?) in the given expression? $450 \times 30 + 1500 \times 20 = ?\% \times 43500$

1. **100**
2. 50
3. 200
4. 150
5. 250

55) What will come in the place of the question mark '?' in the following question? $8974 + 3567 - 8976 - 3565 + 8652 = ?$

1. 7652
2. 8752
3. 8662
4. **8652**
5. None of these.

56) What is the difference between the total production of Ford and Tata motors in the given years?

1. 40,000
2. **20,000**
3. 26,000
4. 35,000
5. 25,000

57) What is the average number of cars manufactured by Honda over the given period?

1. **2,10,000**
2. 2,00,000
3. 2,60,000
4. 2,50,000
5. 2,55,000

58) The production of Honda in 2018 was approximately what percent of the production of Tata Motors in the same year?

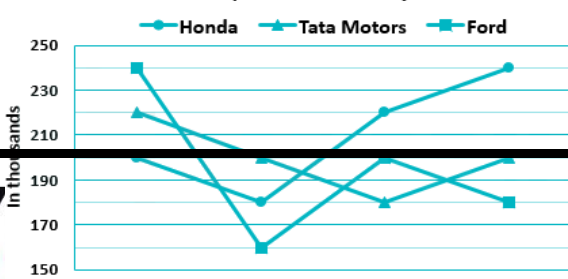
1. 140%
2. 102%
3. **122%**
4. 134%
5. None of the above

59) What is the difference between the number of cars manufactured by Ford in the year 2018 and 2019?

1. 22,000
2. 21,000
3. 10,000
4. **20,000**
5. 24,000

Direction: Study the following line graph and answer the question accordingly

Number of cars manufactured by three companies over the years





spardhaguru2022



Spardhaguru Current affairs



Spardhaguru1



SpardhaGuru



Spardha.guru



www.spardha.guru



60) What is the average of all the cars manufactured by Tata Motors and Honda in 2016 and 2019?

1. 2,20,000
2. 2,19,000
3. **2,15,000**
4. 2,00,000
5. 2,40,000

61) Amar borrowed Rs. 10000 from Sachin at simple interest. After 4 years, Sachin received Rs. 5000 more than the amount given to Amar on loan. Find the rate of interest.

1. **12.5%**
2. 25%
3. 20%
4. 4%
5. None of these

62) Mohan can do a piece of work in 10 days and Sohan in 15 days. They started working together, but after 3 days Mohan left the work. What time will Sohan take to finish the work?

1. **15/2 days**
2. 18 days
3. 15 days
4. 5/2 days
5. None of these

63) Rajiv's boat can travel along the current at the 8 km/hour and against the current at the rate 6 km/hour. Find the time taken by the boat to sail 28 km in still water.

1. **4 hours**
2. 5 hours
3. 6 hours
4. 7 hours
5. None of these

64) Ram, Bharat and Sham signed agreement of partnership in the ratio $7/2 : 4/3 : 6/5$. After 4 months, Ram increases his share 50%. If the total profit at the end of one year be Rs. 16,200, then sham's share in the profit is:

1. **Rs 2,700**
2. Rs 3,000
3. Rs 4,000
4. Rs 5,000
5. None of these

65) Length of a rectangle is 3 cm more than width of rectangle and the difference between area of circle and area of rectangle is 84 cm². Find the length of rectangle if radius of circle is 7 cm.

(circle > rectangle)

1. 8 cm
2. **10 cm**
3. 7 cm
4. 14 cm
5. None of these

Direction: Read the following information and answer the following questions.

66) Eight persons whose names begin with A, B, P, C, D, O, Q, and E are sitting around a circular table facing inward. Persons, whose names start with a vowel, do not sit adjacent to each other.

A sits 3rd to the right of D. Two persons sit between P and A. B sits adjacent to O, who sits 4th to the right of

of E. Q sits 3rd to the left of O. Who sits 2nd to the right of B?

1. O
2. **P**
3. A
4. C
5. Q

67) sits 5th to the left of C. B

1. B
2. A
3. **Q**
4. E
5. D





spardhaguru2022



Spardhaguru Current affairs



Spardhaguru1




SpardhaGuru



Spardha.guru



www.spardha.guru



68) Who is sitting opposite O?

1. **E**

2. A
3. B
4. P
5. C

69) Four of the five are alike in a certain way and thus form a group. Find the one that does not belong to that group.

1. EQ
2. OP
3. BO
4. ED
5. **CA**

70) Who is sitting at the immediate left of B?

1. **A**
2. P
3. Q
4. E
5. O

Directions: These questions are based on the following information.

There are 7 members in a family. R is the only sibling of S and son of P. Q is the mother of S. T is the mother of V and sister-in-law of S. V is the nephew of S and U is the wife of S. U has no sibling.

71) How is T related to R?

1. Sister-in-law
2. Sister
3. **Wife**
4. None of these
5. Cannot be determined

72) Who is S to V?

1. Father
2. **Paternal Uncle**
3. Maternal Aunt

4. Maternal Uncle
5. Paternal Aunt

73) How many such pairs of digits are there in the number '95126139', which have as many digits between them in the number (both forward and backward direction) as they have between them in the Numeric Series?

1. Three
2. Five
3. **Four**
4. Two
5. None

Direction: Study the following arrangement and answer the question:

74) C B T A E X F I M K E U V N X O D

If all the vowels are dropped from the given arrangement, which of the following is 9th from the right end?

1. **T**
2. X
3. B
4. F
5. C

75) How many such consonants are there which are immediately followed by a consonant and immediately preceded by a vowel?

1. None
2. One
3. Two
4. **Three**
5. Four

76) Which letter is 5th to the right of the 3rd from the left end in the given arrangement?

1. F
2. **I**
3. X
4. M
5. K





spardhaguru2022



Spardhaguru Current affairs



Spardhaguru1




SpardhaGuru



Spardha.guru



www.spardha.guru



Directions: Read the following information carefully and answer the questions given below: There are 7 persons A, B, C, D, E, F, and G. and they have to attend a meeting in a reputed hotel in

Agra on Sunday, Monday, Tuesday, Wednesday, Thursday, Friday, and Saturday, Starting the week from Monday but not necessarily in the same order.

(Assume that they attend the meeting in the same month of the year.)

B attends a meeting on Thursday. Only one person attends the meeting between B and G. A attends the meeting immediately after G. The number of people who attend a meeting before A is the same as the number of people who attend the meeting after C. Only one person attends a meeting between C and D. F attends the meeting after D.

77) On which of the following days does E have to attend the meeting?

1. Sunday
2. Monday
3. Friday
4. Saturday
5. **Tuesday**

78) Who among the following has to attend the meeting on Saturday?

1. F
2. D
3. B
4. A
5. **G**

79) On which of the following days does D have to attend the meeting?

1. Sunday
2. Monday
3. **Wednesday**
4. Saturday
5. Tuesday

80) how many people do attend the meeting between B and A?

1. 5
2. 4
3. 3
4. **2**
5. 1

81) Find the odd one?

1. GA
2. CE
3. FG
4. **EG**
5. DB

Directions: The following questions are based on five three digit numbers given below: 453 619 574 471 372

82) If in each number, all the three digits are arranged in ascending order within the number, which of the following will be the second lowest number after rearrangement?

1. 453
2. 574
3. 471
4. **619**
5. None of these

83) If in each number, all the odd digit is added by 1 and all the even digit is added by 2 then, which of the following will be the lowest number after mentioned operation?

1. 619
2. 574
3. **372**
4. 471
5. 453

84) If all the digit in each of the numbers are arranged in descending order within the number





spardhaguru2022



Spardhaguru Current affairs



Spardhaguru1



SpardhaGuru



Spardha.guru



www.spardha.guru



then, which of the following will be the highest number in the new arrangement of numbers?

1. 453
2. 372
3. 574
4. **619**
5. None of these

85) If second digit will be interchanged with third digit in each number, then which number will be the second highest number after rearrangement?

1. 453
2. 619
3. **574**
4. 372
5. None of these

86) If in each number, both first and third digits are added and after that second digit is subtracted from that addition then how many numbers are less than 2 after mentioned operation?

1. Three
2. Four
3. None
4. **Two**
5. One

Direction: Study the following information to answer the given questions:

Point P is 3m towards south of point Q who is 4m towards east of point R. Point S is 6m towards south of point R while point T is 8m towards west of point S. Point V is 7m towards west of point U who is 3m north of point T.

87) What is the direction of U with respect to P?

1. South-East
2. East
3. **West**
4. North-West
5. None of these

88) What is the shortest distance between R and T?

1. 11m
2. 14m
3. 12m
4. **10m**
5. 13m

89) If a person walks 3m towards the North from point V, takes a right turn and walks for another 15m, which of the following points would he reach?

1. **R**
2. Q
3. T
4. S
5. Cannot be determined

90) If in the word 'ADVANCE', all the vowels are replaced with the next letters and all the consonants are replaced with the previous letters from the English Alphabet. Now if all vowels are deleted how many consonants are remain there?

1. Three
2. Four
3. Five
4. **Six**
5. Seven

Direction: Read the following information carefully and answer the questions that follow:

There are seven persons namely A, B, C, D, E, F, and G. They all are sitting in a row facing north. G sits second from one of the ends. E has equal number of persons to his left and right side. F sits on the extreme left end of the row. There are three persons between F and B. A sits immediate right of C. A does not sit at the corner.

91) Who is sitting second to the left of E?

1. A
2. **C**
3. G
4. F
5. B





spardhaguru2022



Spardhaguru Current affairs



Spardhaguru1




SpardhaGuru



Spardha.guru



www.spardha.guru



92) How many persons are sitting between A and G?

1. Five
2. **Two**
3. Four
4. Three
5. One

93) Who is sitting third from the right end?

1. D
2. **B**
3. E
4. A
5. C

94) How many persons are sitting to the left of G?

1. Four
2. **Five**
3. One
4. Two
5. Three

95) Who is sitting exactly between F and B?

1. C
2. B
3. D
4. E
5. **A**

Directions: In the following question assuming the given statements to be true, find which of the conclusion(s) among given conclusions is/are definitely true and then give your answers accordingly.

96) Statement:

$$Y \geq C < O \geq F < R = B$$

Conclusions:

- I. $B > F$
- II. $R > C$
1. **Only I follows**
2. Only II follows
3. Either I or II follow
4. Neither I nor II follow
5. Both I and II follow

Directions: In each of the following questions assuming the given statement to be true, find which of the conclusions among given conclusions is / are definitely true and then give your answers

accordingly.

97) Statement: $E < U > L > K \leq T = H \leq Q$

Conclusions:

- I. $U > H$
- II. $T \leq Q$
1. Only Conclusion I follows
2. **Only Conclusion II follows**
3. Either Conclusion I or II follows
4. Neither Conclusion I nor II follows
5. Both Conclusion I and II follows

Directions: In the following question assuming the given statements to be True, find which of the conclusion among given conclusions is/are definitely true and then give your answers accordingly.

98) Statements: $Y > U \geq Z \geq K = X \leq B \leq A$

Conclusions:

- I. $U = X$
- II. $U > X$
1. Only conclusion I follow
2. Only conclusion II follow
3. Both I and II are follow
4. **Either conclusion I or II follow**
5. None of these

Directions: In each of the following questions assuming the given statement to be true, find which of the conclusions among given conclusions is/are definitely true and then give your answers accordingly.

99) Statement: $S > L < P = T \geq V > R$

Conclusions:

- I. $P > R$
- II. $S > V$
1. **Only Conclusion I follows**





spardhaguru2022



Spardhaguru Current affairs



Spardhaguru1



SpardhaGuru



Spardha.guru



www.spardha.guru



2. Only Conclusion II follows
3. Either Conclusion I or II follows
4. Neither Conclusion I nor II follows
5. Both Conclusion I and II follows

100) If it is possible to make a meaningful word with the third, fifth, ninth, and tenth letters of the word "PERSEVERANCE" which of the following will be the second letter from the right end of that

newly formed word? If more than one such word can be made, give M as the answer and if no such word can be made, give Y as the answer.

1. A
2. Y
3. R
4. **M**
5. E

