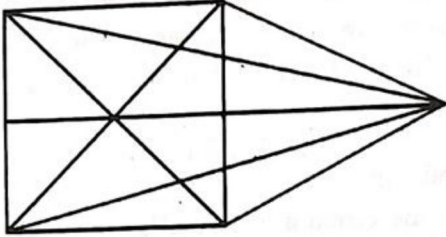
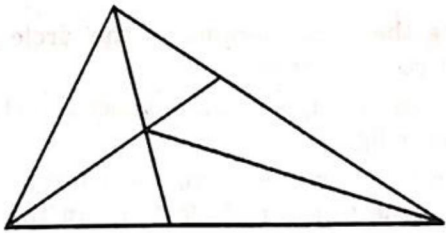


1. What is the number of straight lines in the following figure?



- a) 10  
b) 12  
c) 13  
d) 17

2. How many triangles are there in the following figure?



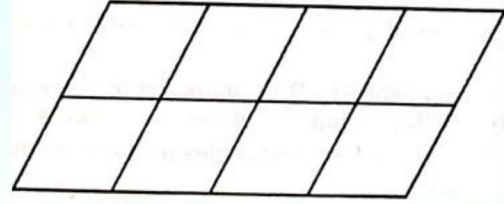
- a) 6  
b) 10  
c) 11  
d) 12

3. Count the number of squares in the following figure:



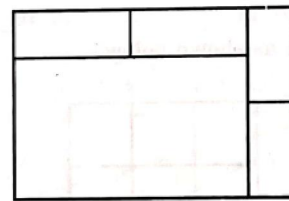
- a) 18  
b) 14  
c) 10  
d) 9

4. How many parallelograms are there in the following figure?



- a) 20  
b) 24  
c) 28  
d) 30

5. What is the number of rectangles in the following figure?



- a) 6  
b) 7  
c) 9  
d) 11