



spardhaguru2022



Spardhaguru Current affairs



Spardhaguru1




SpardhaGuru



Spardha.guru

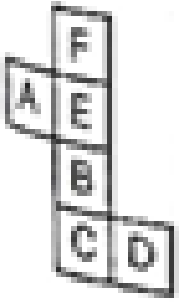


www.spardha.guru




DIRECTIONS (Q Nos. 1 – 6) In the questions given below an unfolded dice is given in the left side while in the right side, four answer choices are given in the form of a complete dice. You are required to select the correct answer choice which is formed by folding the unfolded dice.

1. Question Figure




Answer Figures



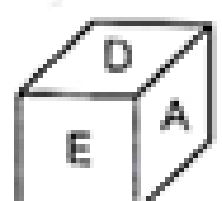
(a)



(b)




(c)



(d)

Ans : (b)

2. Question Figure



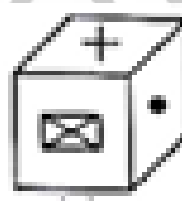
Answer Figures




(a)



(b)



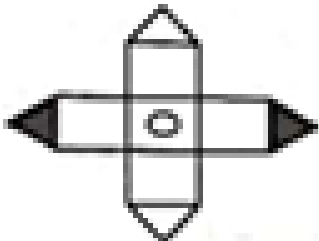
(c)




(d)

Ans : (c)

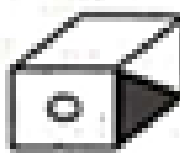
3. Question Figure



Answer Figures



(a)



(b)



(c)



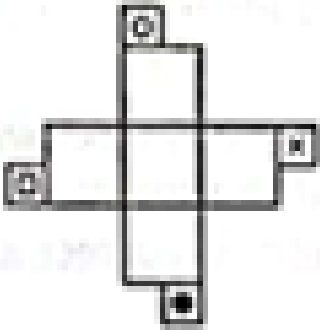
(d)

Ans : (d)

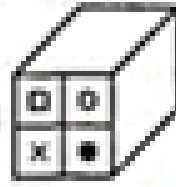


4. Question Figure


Answer Figures



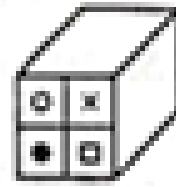
(a)



(b)



(c)





(d)


Ans : (a)

5. Question Figure

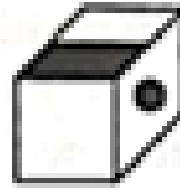
Answer Figures




I



II



III



IV

(a) I and II


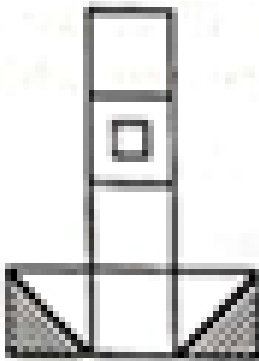
(b) II and III

(c) I, II and III


(d) I, II, III and IV

6. Question Figure

Answer Figures




I



II



III



IV

(a) I and II

(b) II and III

(c) I, II and III

(d) I, II, III and IV



spardhaguru2022



Spardhaguru Current affairs



Spardhaguru1




SpardhaGuru



Spardha.guru




www.spardha.guru



Practice Questions

1. If the given figure is folded to form a cube, then which symbol will be opposite to the symbol '+'?

[SSC CPO 2019]

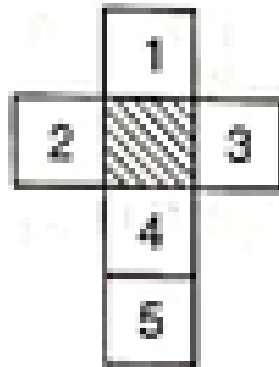


- (a) %
(c) \$

- (b) @
(d) #

2. In the following figure, if the base of the cube is the shaded part and face 1 is in front of you, then which will be the opposite face of it?

[SSC 10+2 2006]



- (a) 2
(c) 4

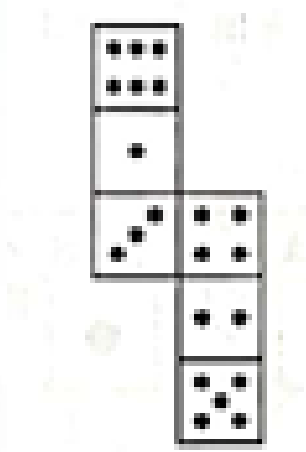
- (b) 3
(d) 5





3. If a cube is formed from the following figure, then which face will be opposite to the face having 3 dots?


[SSC FCI 2011]



- (a) 2 (b) 4
(c) 5 (d) 6

4. If a cube is made from the following figure, then which lettered face will be opposite to the face F?

[IGNOU B.Ed 2010]



- (a) A (b) B
(c) C (d) D




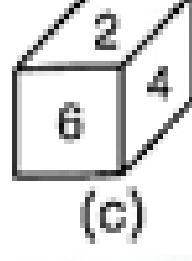
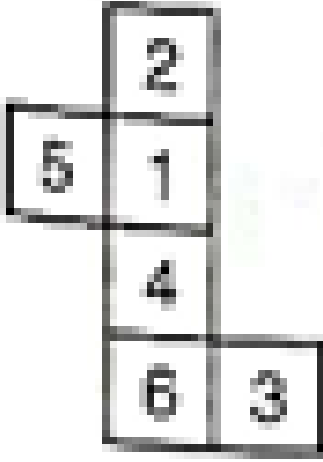


DIRECTIONS (Q. Nos. 5 – 37) In each question given below, an unfolded dice is given in the left side while in the right side, four answer choices are given in the form of complete dice. You are required to select the correct answer choice(s) which is/are formed by folding the unfolded dice.

5. Question Figure

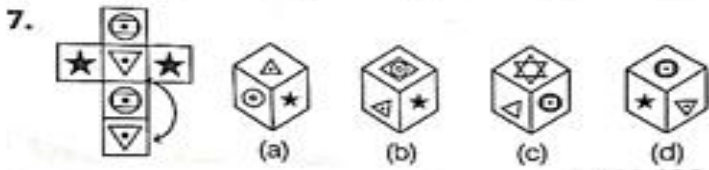
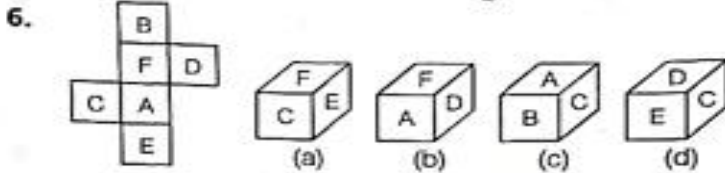
Answer Figures

[CMAT 2013]

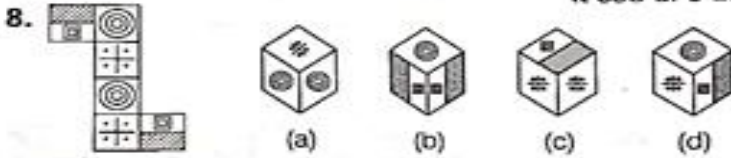


Question Figure

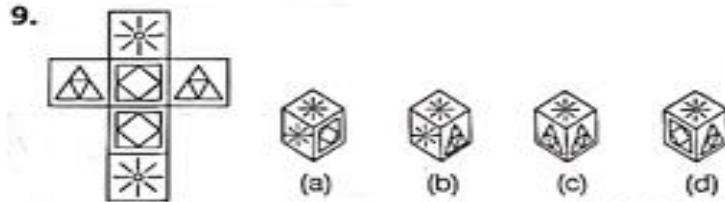
Answer Figures



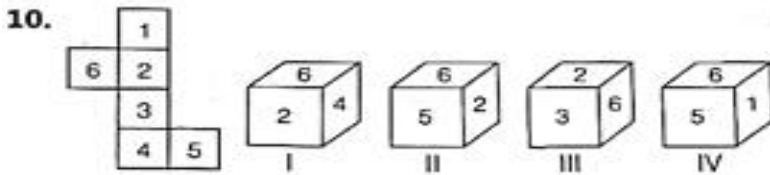
« SSC CPO 2010



« SSC CGL 2008

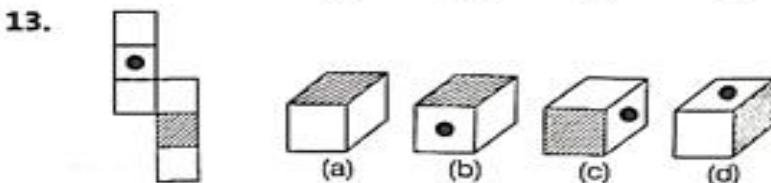
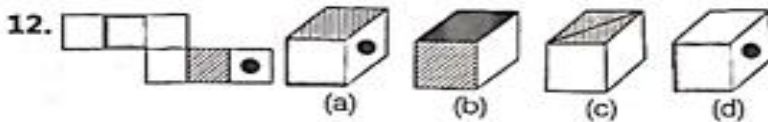
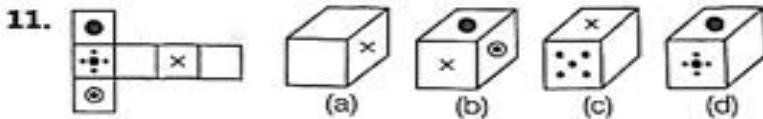


« SSC CGL 2008



(a) Only I
(c) I and II

(b) Only II
(d) Only III



Spardhaguru

a Private Limited



spardhaguru2022



Spardhaguru Current affairs



Spardhaguru1




SpardhaGuru



Spardha.guru



www.spardha.guru



Question Figure

Answer Figures

14.

(a)

(b)

(c)

(d)

15.

(a)

(b)

(c)

(d)

16.

(a)

(b)

(c)

(d)

17.

(a)

(b)

(c)

(d)

18.

(a)

(b)

(c)

(d)

19.

(a)

(b)

(c)

(d)

20.

(a)

(b)

(c)

(d)

21.

(a)

(b)

(c)

(d)

22.

(a)

(b)

(c)

(d)

Spardhaguru
India Private Limited





spardhaguru2022



Spardhaguru Current affairs



Spardhaguru1




SpardhaGuru



Spardha.guru



www.spardha.guru



23. (a) (b) (c) (d)
24. (a) (b) (c) (d)
25. (a) I, II and III (b) II, III and IV (c) I, II and IV (d) I, III and IV
26. (a) I and II (b) II and III (c) I and III (d) II and IV
27. (a) I and II (b) II and III (c) I, II and III (d) I, II, III and IV
28. (a) Only I (b) II and III (c) III and IV (d) I and IV
29. (a) I and II (b) II and III (c) I and III (d) II and IV
30. (a) I and II (b) II and III (c) I and III (d) I and IV





spardhaguru2022



Spardhaguru Current affairs



Spardhaguru1



SpardhaGuru



Spardha.guru



www.spardha.guru

Question Figure

Answer Figures

31.
 (a) I and II (b) III and IV
 (c) II and IV (d) I and IV
32.
 (a) I and II (b) II and IV
 (c) I and IV (d) III and IV
33.
 (a) Only I (b) II and III
 (c) I, II and IV (d) I, II, III and IV
34.
 (a) I and II (b) II and III
 (c) III and IV (d) II and IV
35.
 (a) I and III (b) II and IV
 (c) I, II and IV (d) I, II, III and IV
36.
 (a) I, II and III (b) I, III and IV
 (c) I and IV (d) None of these
37.
 (a) I, II and III (b) II, III and IV
 (c) I, II and IV (d) I, III and IV

Spardhaguru

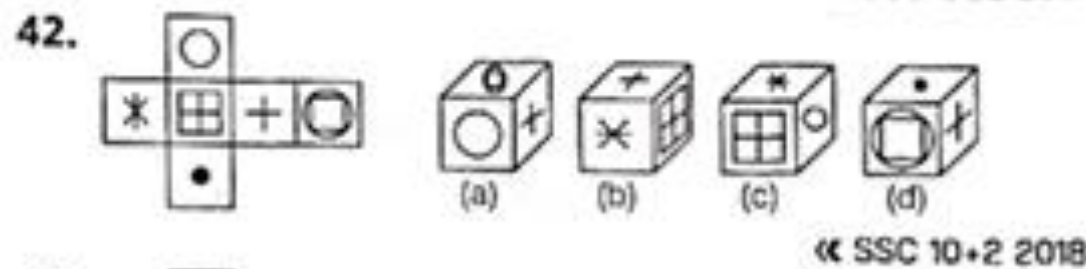
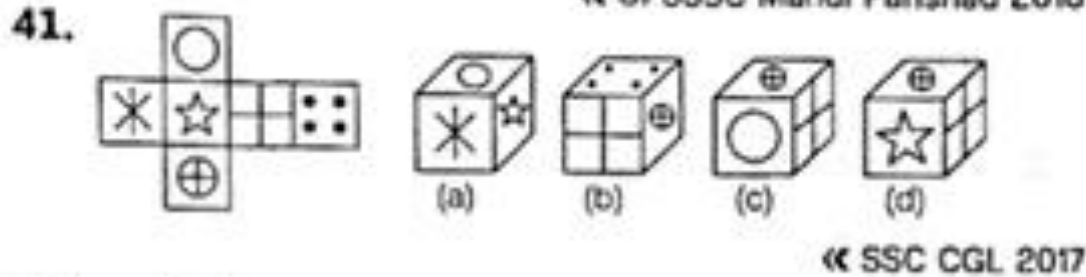
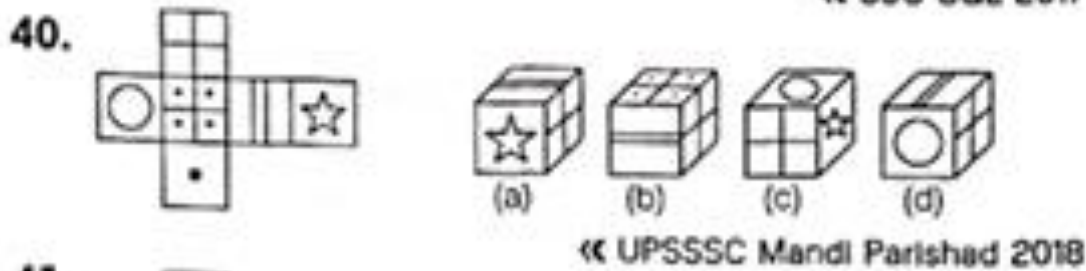
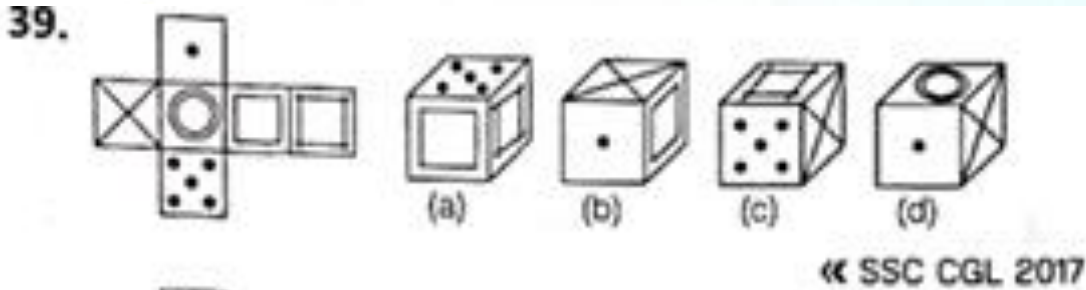
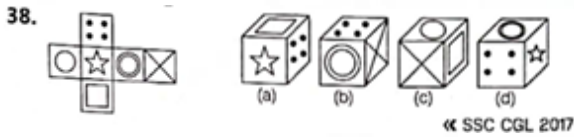
India Private Limited



DIRECTIONS (Q. Nos. 38 - 43) Which of the following cube in the answer figures cannot be made based on the unfolded cube in the question figure?

Question Figure

Answer Figures





spardhaguru2022



Spardhaguru Current affairs



Spardhaguru1




SpardhaGuru



Spardha.guru

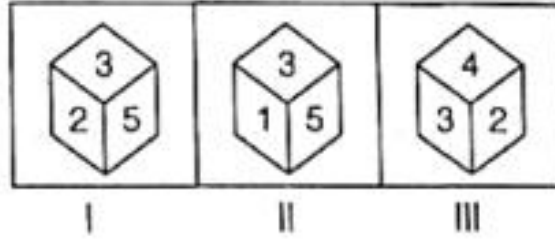


www.spardha.guru

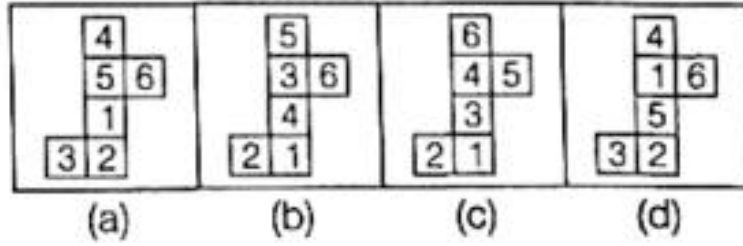


44. Three views of the same cube are given. All the faces of the cube are numbered from 1 to 6. Select one figure which will result when the cube is unfolded.
[SSC CGL 2013]

Question Figures



Answers Figures



1) d	2) c	3) d	4) a	5) d	6) b	7) d	8) d	9) d	10) d
11) d	12) d	13) a	14) b	15) a	16) a	17) b	18) a	19) b	20) d
21) c	22) b	23) a	24) d	25) a	26) a	27) d	28) a	29) d	30) d
31) b	32) d	33) d	34) a	35) d	36) b	37) b	38) a	39) b	40) d
41) c	42) b	43) d	44) d						

