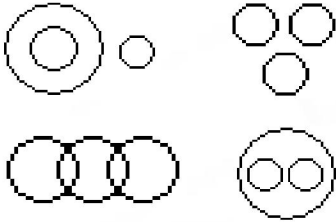
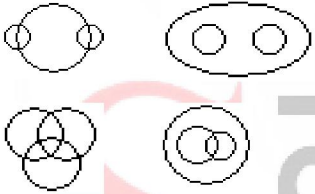


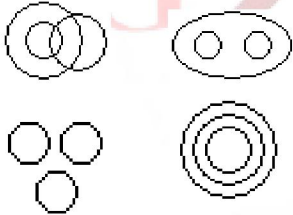
1. Which of the following diagrams indicates the best relation between Travelers, Train and Bus?



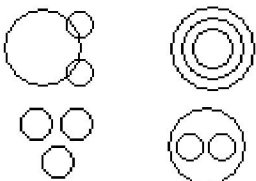
2. Which of the following diagrams indicates the best relation between Profit, Dividend and Bonus?



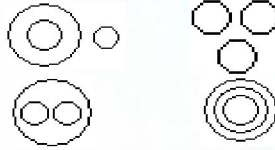
3. Which of the following diagrams indicates the best relation between Women, Mothers and Engineers?



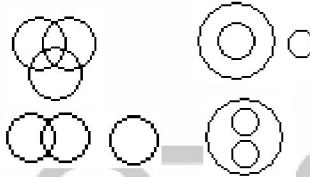
4. Which of the following diagrams indicates the best relation between Factory, Product and Machinery?



5. Which of the following diagrams indicates the best relation between Author, Lawyer and Singer?



6. Which of the following diagrams indicates the best relation between Judge, Thieves and Criminals?



7. Which of the following diagrams indicates the best relation between India, Haryana and World?



8. Which of the following diagrams indicates the best relation between Pigeon, Bird and Dog?



9. Which of the following diagrams indicates the best relation between Earth, Sea and Sun?



10. Which of the following diagrams indicates the best relation between Hockey, Football and Cricket?



11. Which of the following diagrams indicates the best relation between Iron, Lead and Nitrogen?



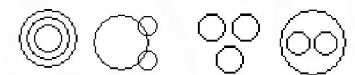
12. Which of the following diagrams indicates the best relation between Examination, Questions and Practice?



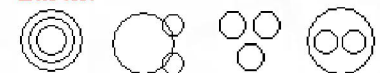
13. Which of the following diagrams indicates the best relation between Bulb, Lamp and Light ?



14. Which of the following diagrams indicates the best relation between Lion, Dog and Snake?



15. Which of the following diagrams indicates the best relation between Moon, Sun and Earth?





16. Which of the following diagrams indicates the best relation between Hospital, Nurse and Patient?



17. Which of the following diagrams indicates the best relation between Mercury, Zinc and Metal?



18. Which of the following diagrams indicates the best relation between Teacher, Writer and Musician?



19. Which of the following diagrams indicates the best relation between Boys, Girls and Students?



20. Which of the following diagrams indicates the best relation between tall man, Black haired people and Indians?



21. Which of the following diagrams indicates the best relation between Furniture, Chairs and Tables?



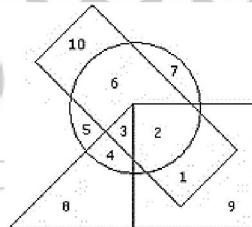
22. Which of the following diagrams indicates the best relation between Elephant, Carnivorous and Tiger?



23. Which of the following diagrams indicates the best relation between Vegetables, Tomato and Fruits?

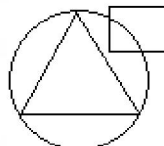


24. In the following diagram the boys who are athletic and are disciplined are indicated by which number?



□ → Boys ○ → Athletics  
△ → Girls □ → Disciplined

25. In an organization of pollution control board, engineers are represented by a circle, legal experts by a square and environmentalist by a triangle. Who is most represented in the board as shown in the following figure?



A. Environmentalists

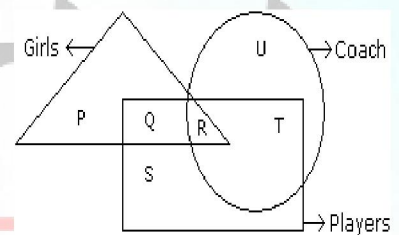
B. Legal Experts

C. Engineers with legal background

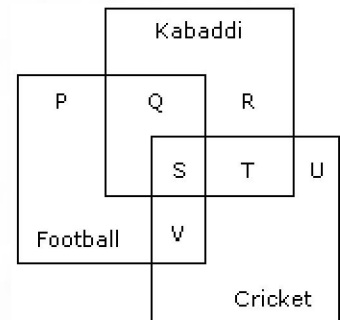
D. Environmentalists with Engineering background

26. In the following figure triangle represents 'girls', square players, and circle-coach. Which part of the diagram represents the girls who are player but not coach?

a) P b) Q c) R d) S



27. The diagram given below represents those students who play Cricket, Football and Kabaddi.



Study the diagram and identify the students who play all the three games.

a) P + Q + R  
b) V + T  
c) S + T + V



spardhaguru2022



Spardhaguru Current affairs



Spardhaguru1




SpardhaGuru



Spardha.guru

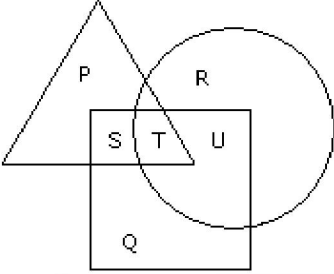


www.spardha.guru



d) S

28. In the figure given below, square represents doctors, triangle represents ladies and circle represents surgeon. By which letter the ladies who doctor and surgeon both are represented



a) U b) T c) S d) P

29. Study the diagram and identify the people who can speak only one language.

