



spardhaguru2022



Spardhaguru Current affairs



Spardhaguru1




SpardhaGuru



Spardha.guru



www.spardha.guru

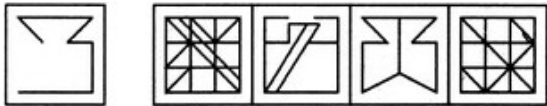


## EMBEDDED FIGURE + INCOMPLETE PATTERN

Directions to Solve

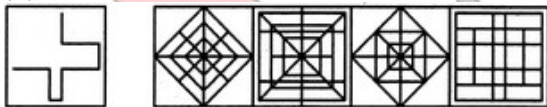
In each of the following questions, you are given a figure (X) followed by four alternative figures (1), (2), (3) and (4) such that figure (X) is embedded in one of them. Trace out the alternative figure which contains fig. (X) as its part.

1) Find out the alternative figure which contains figure (X) as its part.



- a) 1    b) 2  
c) 3    d) 4

2) Find out the alternative figure which contains figure (X) as its part.



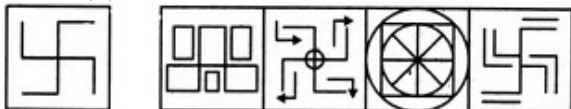
- a) 1    b) 2  
c) 3    d) 4

3) Find out the alternative figure which contains figure (X) as its part.



- a) 1    b) 2  
c) 3    d) 4

4) Find out the alternative figure which contains figure (X) as its part.



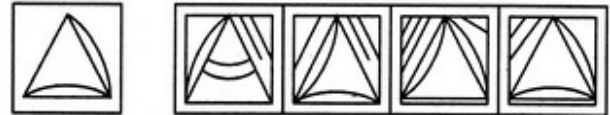
- a) 1    b) 2  
c) 3    d) 4

5) Find out the alternative figure which contains figure (X) as its part.



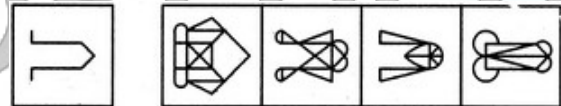
- a) 1    b) 2  
c) 3    d) 4

6) Find out the alternative figure which contains figure (X) as its part.



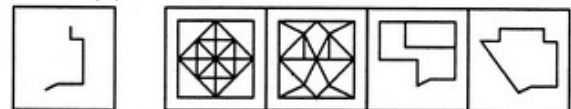
- a) 1    b) 2  
c) 3    d) 4

7) Find out the alternative figure which contains figure (X) as its part.



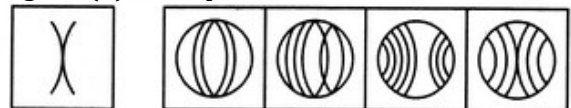
- a) 1    b) 2  
c) 3    d) 4

8) Find out the alternative figure which contains figure (X) as its part.



- a) 1    b) 2  
c) 3    d) 4

9) Find out the alternative figure which contains figure (X) as its part.



- a) 1    b) 2  
c) 3    d) 4

10) Find out the alternative figure which contains figure (X) as its part.





spardhaguru2022



Spardhaguru Current affairs



Spardhaguru1



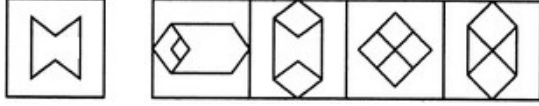
SpardhaGuru



Spardha.guru

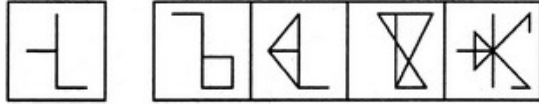


www.spardha.guru



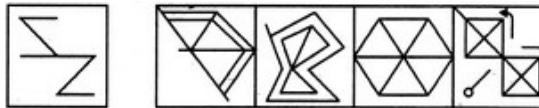
- a) 1 b) 2  
c) 3 d) 4

11) Find out the alternative figure which contains figure (X) as its part.



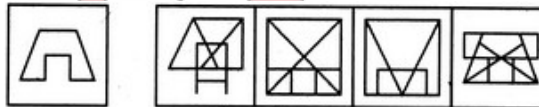
- a) 1 b) 2  
c) 3 d) 4

12) Find out the alternative figure which contains figure (X) as its part.



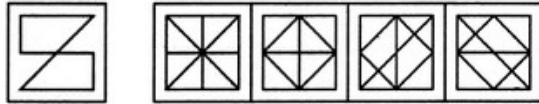
- a) 1 b) 2  
c) 3 d) 4

13) Find out the alternative figure which contains figure (X) as its part.



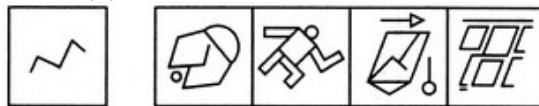
- a) 1 b) 2  
c) 3 d) 4

14) Find out the alternative figure which contains figure (X) as its part.



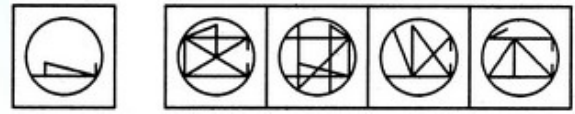
- a) 1 b) 2  
c) 3 d) 4

15) Find out the alternative figure which contains figure (X) as its part.



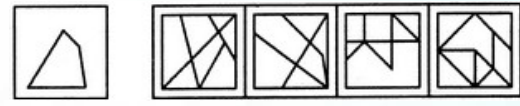
- a) 1 b) 2  
c) 3 d) 4

16) Find out the alternative figure which contains figure (X) as its part.




- a) 1 b) 2  
c) 3 d) 4

17) Find out the alternative figure which contains figure (X) as its part.



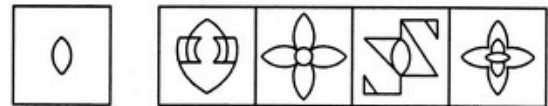
- a) 1 b) 2  
c) 3 d) 4

18) Find out the alternative figure which contains figure (X) as its part.



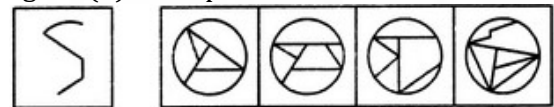
- a) 1 b) 2  
c) 3 d) 4

19) Find out the alternative figure which contains figure (X) as its part.



- a) 1 b) 2  
c) 3 d) 4

20) Find out the alternative figure which contains figure (X) as its part.



- a) 1 b) 2  
c) 3 d) 4







spardhaguru2022



Spardhaguru Current affairs



Spardhaguru1




SpardhaGuru



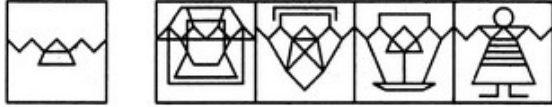
Spardha.guru



www.spardha.guru



21) Find out the alternative figure which contains figure (X) as its part.



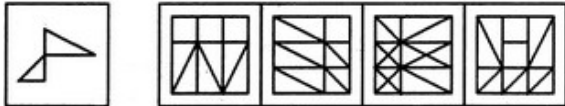
- a) 1    b) 2  
c) 3    d) 4

22) Find out the alternative figure which contains figure (X) as its part.



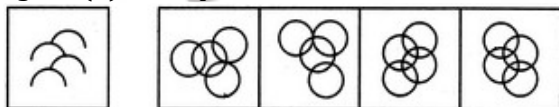
- a) 1    b) 2  
c) 3    d) 4

23) Find out the alternative figure which contains figure (X) as its part.



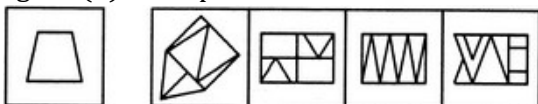
- a) 1    b) 2  
c) 3    d) 4

24) Find out the alternative figure which contains figure (X) as its part.



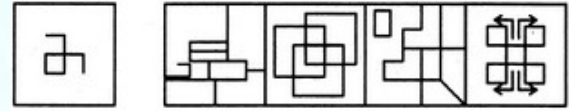
- a) 1    b) 2  
c) 3    d) 4

25) Find out the alternative figure which contains figure (X) as its part.



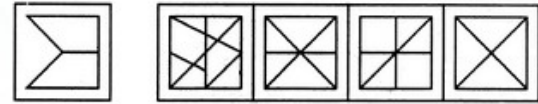
- a) 1    b) 2  
c) 3    d) 4

26) Find out the alternative figure which contains figure (X) as its part.



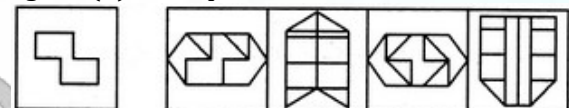
- a) 1    b) 2  
c) 3    d) 4

27) Find out the alternative figure which contains figure (X) as its part.



- a) 1    b) 2  
c) 3    d) 4

28) Find out the alternative figure which contains figure (X) as its part.



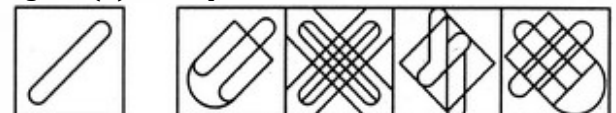
- a) 1    b) 2  
c) 3    d) 4

29) Find out the alternative figure which contains figure (X) as its part.



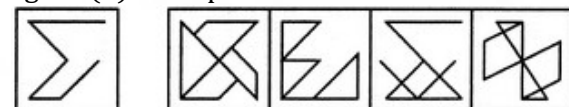
- a) 1    b) 2  
c) 3    d) 4

30) Find out the alternative figure which contains figure (X) as its part.



- a) 1    b) 2  
c) 3    d) 4

31) Find out the alternative figure which contains figure (X) as its part.



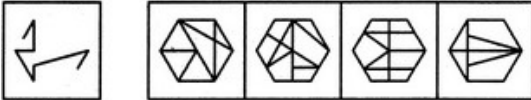
- a) 1 b) 2  
c) 3 d) 4

32) Find out the alternative figure which contains figure (X) as its part.



- a) 1 b) 2  
c) 3 d) 4

33) Find out the alternative figure which contains figure (X) as its part.



- a) 1 b) 2  
c) 3 d) 4

34) Find out the alternative figure which contains figure (X) as its part.



- a) 1 b) 2  
c) 3 d) 4

35) Find out the alternative figure which contains figure (X) as its part.

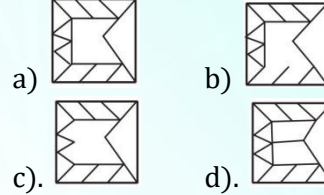
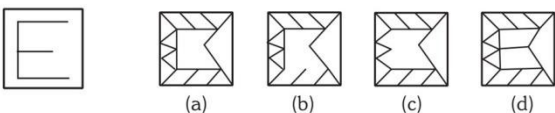


- a) 1 b) 2  
c) 3 d) 4

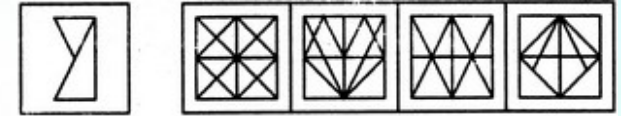
36) Select the answer figure in which the question figure is hidden ?

Question figure

Answer Figure

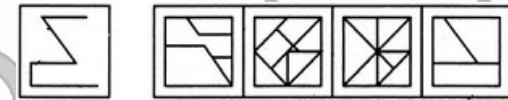


37) Find out the alternative figure which contains figure (X) as its part.



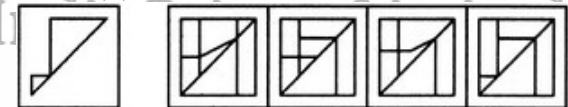
- a) 1 b) 2  
c) 3 d) 4

38) Find out the alternative figure which contains figure (X) as its part.



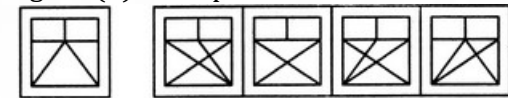
- a) 1 b) 2  
c) 3 d) 4

39) Find out the alternative figure which contains figure (X) as its part.



- a) 1 b) 2  
c) 3 d) 4

40) Find out the alternative figure which contains figure (X) as its part.



- a) 1 b) 2  
c) 3 d) 4

41) Find out the answer figure in which the given question figures is embedded.



spardhaguru2022



Spardhaguru Current affairs



Spardhaguru1




SpardhaGuru



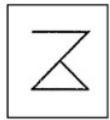
Spardha.guru



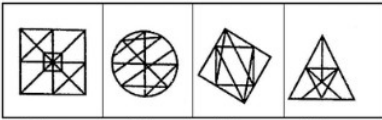
www.spardha.guru



Question Figure



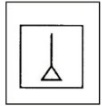
Answer Figures



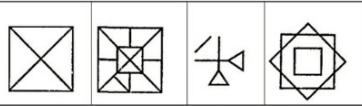
- a) a    b) b  
c) c    d) d

42) Choose the correct answer figure in which the question figure is embedded.

Question Figure



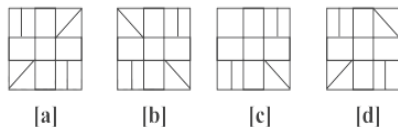
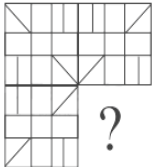
Answer Figures



- a) a    b) b  
c) c    d) d

43)

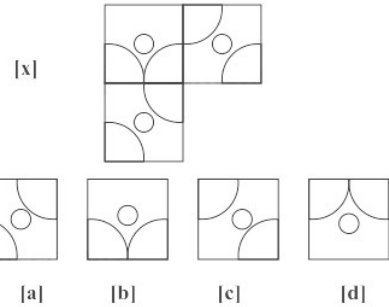
In Each of following questions, a part of question figure is missing. Find out form the given answer figures a, b, c, d



- a) a    b) b  
c) c    d) d

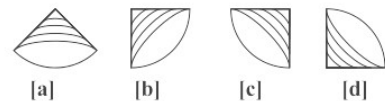
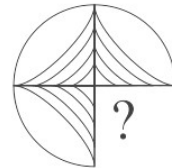
44)

Complete the pattern in figure. (x) by selecting on of the figures from the four alternatives.



- a) a    b) b  
c) c    d) d

In Each of following questions, a part of question figure is missing. Find out form the given answer figures a, b, c, d

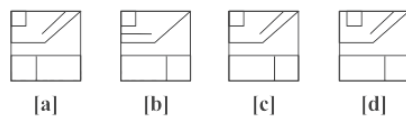
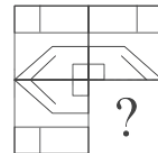


45)

- a) a    b) b  
c) c    d) d

46)

In Each of following questions, a part of question figure is missing. Find out form the given answer figures a, b, c, d



- a) a    b) b  
c) c    d) d

46)







spardhaguru2022



Spardhaguru Current affairs



Spardhaguru1




SpardhaGuru



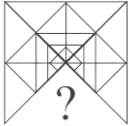
Spardha.guru



www.spardha.guru



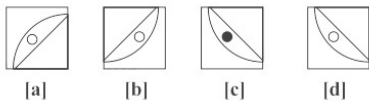
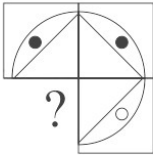
In Each of following questions, a part of question figure is missing. Find out form the given answer figures a, b, c, d



- a) a b) b  
c) c d) d

47)

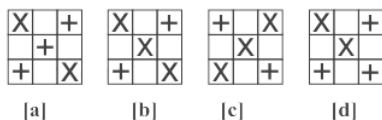
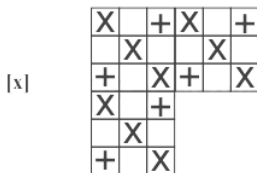
In Each of following questions, a part of question figure is missing. Find out form the given answer figures a, b, c, d



- a) a b) b  
c) c d) d

48)

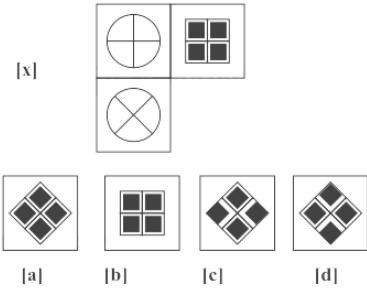
Complete the pattern in figure. (x) by selecting on of the figures from the four alternatives.



- a) a b) b  
c) c d) d

49)

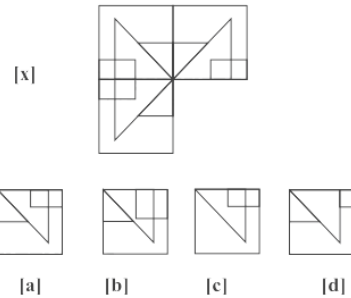
Complete the pattern in figure. (x) by selecting on of the figures from the four alternatives.



- a) a b) b  
c) c d) d

50)

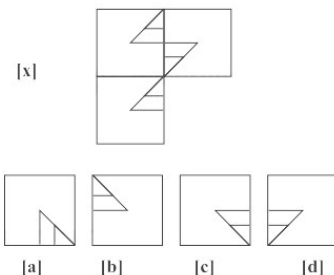
Complete the pattern in figure. (x) by selecting on of the figures from the four alternatives.



- a) a b) b  
c) c d) d

51)

Complete the pattern in figure. (x) by selecting on of the figures from the four alternatives.



- a) a b) b  
c) c d) d

