



spardhaguru2022



Spardhaguru Current affairs



Spardhaguru1




SpardhaGuru



Spardha.guru



www.spardha.guru



1) In which direction is 'G' facing?

- a) West b) East
c) South d) North

2) In which direction is 'F' facing ?

- a) West b) East
c) South d) North

3) In which direction is 'D' facing ?

- a) West b) East
c) South d) North

4) In which direction is 'B' facing ?

- a) West b) East
c) South d) North

5) From his house, Lokesh went 15 kms to the North. Then he turned West and covered 10 kms. Then, he turned South and covered 5 kms. Finally, turning to East, he covered 10 kms. In which direction is he from his house ?

- a) West b) South
c) North d) East

6) Roy walks 2 km to East, then turns North-West and walks 3 km. Then he turns South and walks 5 km. Then again he turns West and walks 2 km. Finally he turns North and walks 6 km. In which direction, is he from the starting point?

- a) North – West b) South – East
c) South – West d) North – East

7) If Mohan sees the rising sun behind the temple and the setting sun behind the railway station from his house, what is the direction of the temple from the railway station?

- a) East b) North
c) South d) West

8) If South-East is called East, South-West is called South and in the same way directions are changing. Then what would we say the North direction?

- a) South-East b) North-East
c) North-West d) South-West

9) Seeta starts from a point, walks 2 km towards north, turns towards her right and walks 2 km, turns right again and walks. What is the direction she is facing now ?

- a) South b) West
c) East d) North

10) Rahim rode on his bicycle from his house towards the market for 300 m. He was moving southwest. Then he turned left at an angle of 135° and rode for 100 m to visit a friend. In which direction is Rahim's house located from his friend's house?

- a) West b) East
c) North d) South

11) A boy walks northwards. After a while he turns towards his right and a little further to his left. Finally after walking a distance of one kilometre, he turns to his left again. In which direction he is moving now ?

- a) East b) South
c) North d) West

12) One morning after sunrise, Reeta and Kavita were talking to each other face to face at Tilak Square. Kavita's shadow was exactly to the right of Reeta, which direction Kavita was facing ?

- a) South b) Data inadequate
c) East d) North
e) None of these

13) A man starts from his house and walked straight for 10 metres towards North and turned left and walked 25 metres. He then turned right and walked 5 metres and again turned right and walked 25 metres. Which direction is he facing now ?

- a) South b) East
c) North d) West





spardhaguru2022



Spardhaguru Current affairs



Spardhaguru1




SpardhaGuru



Spardha.guru



www.spardha.guru



14) If a person moves 4 km towards west, then turns right and moves 3 km and then turns right and moves 6 km, what is the direction in which he is now moving?

- a) North
b) West
c) East
d) South

15) Mohan starts from point A and walks 1 km towards south, turns left and walks 1 km. Then he turns left again and walks 1 km. Now he is facing

- a) North
b) West
c) East
d) South-west

16) Priya started from point A. after walking for some time, she turned to her right and continued walked, then after some time turned to her right again. Now walking for some distance she turned to her left and after this finally to her right. If now she is walking in west direction, in which direction did she started her journey from point A?

- a) East
b) West
c) North
d) South
e) Cannot be determined

17) A direction pole was situated on the crossing. Due to an accident the pole turned in such a manner that the pointer which was showing East, started showing South. One traveller went to the wrong direction thinking it to be West. In what direction actually he was travelling ?

- a) South
b) West
c) East
d) North

18) Ramesh starts his journey by walking 2 kilometres towards North. Then he takes a right turn and walks 1 kilometre. Again takes a right turn and walks 2 kilometre. Now which direction is he facing ?

- a) South
b) West
c) East
d) North

19) From his house, Ram went 15 kms to the north. Then he turns west and covered 20 km. Then he turned

south and covered 5 km. Finally turning to east, he covered 25 km. In which direction is he from his house?

- a) north east
b) north west
c) south west
d) south east
e) None of these

20) Daily in the morning the shadow of Gol Gumbaz falls on Bara Kaman and in the evening the shadow of Bara Kaman falls on Gol Gumbaz exactly. So in which direction is Gol Gumbaz to Bara Kaman ?

- a) Northern side
b) Western side
c) Eastern side
d) Southern side

21) A man walks 7 km towards south and turns to the left. After walking 5 km, he turns to the right and walks 7 km. In which direction is he now from the starting point ?

- a) South-East
b) South
c) West
d) North-East

22) Rajan started from his house and went 2 km east, then he turned right and went 3 km, again turned right and went 3 km, again he turned right and covered 1 km and finally after turning right and going 1 km he reached point 'K'. In which direction was Rajan walking when he reached?

- a) South
b) East
c) West
d) North

23) Amit walked 30 metres towards East, took a right turn and walked 40 metres. Then he took a left turn and walked 30 metres. In which direction is he now from the starting point?

- a) East
b) South
c) South-east
d) North-east
e) None of these

24) P started walking from North to South. She turned right at right angle and then again right at right angle. In which direction was she ultimately walking ?

- a) South
b) East
c) North
d) West





spardhaguru2022



Spardhaguru Current affairs



Spardhaguru1




SpardhaGuru



Spardha.guru



www.spardha.guru



25) Sharada started to move in the direction of south. After moving 15 metres, she turned to her left - twice and moved 15 metres each time. Now how far is she and in which direction from her starting point ?

- a) 30 m. East b) 15 m. South
c) 15 m. East d) 20 m. West

26) A man is facing East, then he turns left and goes 10 m, then turns right and goes 5 m, then goes 5 m to the South and from there 5 m to West. In which direction is he from his original place?

- a) North b) West
c) East d) South

27) Ruhi is facing South. She turn right and walk 20 m. Then she turn right again and walk 10 m. Then she turn left and walk 10 m and then turning right and walk 20 m. Then she turn right again and walk 60 m. She is in which direction from her starting point?

- a) North-west b) North
c) North-east d) East
e) None of these

28) A watch reads 4.30. If the minute hand points East, in what direction will the hour hand point ?

- a) North-west b) North-east
c) South-east d) North
e) None of these

29) Karan facing towards south moved straight 2 km and from there turned to his right 90° and travelled 2 km. Then he took a 45° turn to his left and travelled 1 km. Where would he be now with respect to the starting point?

- a) North-west region b) South-east region
c) South region d) South-west region

30) A is 40 m South-west of B. C is 40 m South-east of B. Then, C is in which direction of A ?

- a) West b) South
c) North-east d) East

31) Anuj started walking positioning his back towards the sun. After sometime, he turned left, then turned right and then towards the left again. In which direction is he going now ?

- a) East or West b) South or West
c) North or West d) North or South

32) Gopal started walking 2 km straight from his school. Then he turned right and walked 1 km. Again he turned right and walked 1 km to reach his house. If his house is south-east from his school, then in which direction did Gopal start walking from the school?

- a) South b) West
c) East d) North

33) Sanmitra walked 8 m towards the north. He turned to his right and walked 16 m, then he turned to his left and walked 5 m and again he turned to his left and walked 16 m. In which direction is he from his starting point ?

- a) North b) East
c) South d) West

34) I am facing east. I turn 100° in the clockwise direction and then 145° in the anti clockwise direction. Which direction am I facing now?

- a) South-west b) North-east
c) East d) North

35) A tourist drives 10 km towards West and turns to left and takes a drive of another 4 km. He then drives towards East another 4 km and then turns to his right and drives 5 km. Afterwards he turns to his left and travels 6 km. In which direction is he from the starting point ?

- a) West b) East
c) North d) South

36) A car travelling from south covers a distance of 8 kms, then turns right and runs another 9 kms and again





spardhaguru2022



Spardhaguru Current affairs



Spardhaguru1




SpardhaGuru



Spardha.guru



www.spardha.guru



turns to the right and was stopped. Which direction does it face now?

- a) West
- b) North
- c) South
- d) East

37) Sanmitra starts from his house and walks 3 km towards north. Then he turns right and walks 2 km and then turns right and walks 5 km, then turns right and walks 2 km and then again turns right and walks 2 km. Which direction is he facing now ?

- a) West
- b) South
- c) North
- d) East

38) Suresh starts from a point, walks 2 miles towards south, turns right and walks 1 1/2 miles, turns left and walks 1 2 miles and then he turns back. What is the direction he is facing now ?

- a) South
- b) West
- c) East
- d) North

39) Starting from point A, Sachin walk 20 km towards south direction. He turn left and walk 30 km, again he turn left and walk 20 km, and last he turn left and walk 40 km and reached at point B. If point C is 20 km south of point B, then C is which direction with respect of point A?

- a) North-west
- b) North-east
- c) South-east
- d) South-west
- e) None of these

40) Anuj started walking positioning his back towards the sun. After sometime, he turned left, then turned right and then towards the left again. In which direction is he going now?

- a) South or West
- b) East or West
- c) North or South
- d) North or West
- e) None of these

