



spardhaguru2022



Spardhaguru Current affairs



Spardhaguru1




SpardhaGuru



Spardha.guru



www.spardha.guru



Dear Aspirants,

We invite you to subscribe to our WhatsApp & You tube channel and activate the notification bell to receive updates on job openings and current affairs.



GENERAL ENGLISH

Topic Name - Antonym

1. He spoke against corruption with zeal.

- A. indifference
- B. calmness
- C. despair
- D. passiveness

2. They had an insipid conversation.

- A. lively
- B. argumentative
- C. loud
- D. curious

3. Everything about him, especially his talkative nature, proclaims his effeminacy.

- A. aggressiveness
- B. attractiveness
- C. manliness
- D. boorishness

4. Adversity teaches man to be humble and self-reliant.

- A. sincerity
- B. Animosity
- C. curiosity
- D. prosperity

5. Given these constraint, we have no alternative but to suggest an improvised solution.

- A. a complete





spardhaguru2022



Spardhaguru Current affairs



Spardhaguru1




SpardhaGuru



Spardha.guru



www.spardha.guru



B. a preplanned

C. a permanent

D. a proscribed

6. The chairman initiated the proceedings with a brief speech.

A. confused

B. closed

C. started

D. complicated

7. Those who views are progressive often meet with formidable impediments when they begin to act.

A. revolutionary

B. retrograde

C. brave

D. outmoded

8. There was something strange and morbid about the whole house.

A. healthy

B. cheerful

C. insipid

D. appealing

9. The leader was pragmatic in his approach to the problem facing the country.

A. indefinite

B. vague

C. idealistic

D. optimistic

10. Many people suffer setbacks in their career because of their inherent levity.

A. seriousness

B. solemnity

C. religiosity

D. gravity

GEOGRAPHY

Topic Name – Agriculture and Allied Sector

11. Which of the following is not mentioned in the 'Farmers Produce, Trade and Commerce Bill 2020' of India?

(a) Essential Commodities

(b) Contract Farming

(c) Minimum Support Price

(d) Agriculture Produce Market Committees

12. Given below are two statements, one is labelled as Assertion (A) and other as Reason (R) :

Assertion (A): The Union Budget 2020-21 has focused on Rural Development with aim of doubling farmers' income.

Reason (R): The 16 Action points announced in the budget is centred around agriculture, irrigation and rural development.

Select the correct answer from the codes given below.

Codes :

(a) Both (A) and (R) are true and (R) is the correct explanation of (A)

(b) Both (A) and (R) are true but (R) is not the correct explanation of (A)

(c) (A) is true but (R) is false

(d) (A) is false but (R) is true





spardhaguru2022



Spardhaguru Current affairs



Spardhaguru1




SpardhaGuru



Spardha.guru



www.spardha.guru



13. Genetic industry includes :

- (a) Agriculture
- (b) Fishing
- (c) Hunting
- (d) Mining

14. Which one among the followings is not an objective of food management in India?

- (a) Distribution of food grains
- (b) Procurement of food grains
- (c) Maintenance of food grains buffer stock
- (d) Export of food grains
- (e) None of the above / More than one of the above

15. Which of the following factors/policies were affecting the price of rice in India in the recent past?

- 1. Minimum Support Price
- 2. Government's trading
- 3. Government's stockpiling
- 4. Consumer subsidies

Select the correct answer using the code given below:

- (a) 1, 2 and 4 only
- (b) 1, 3 and 4 only
- (c) 2 and 3 only
- (d) 1, 2, 3 and 4

16. In India, which of the followings can be considered as public investment in agriculture?

- 1. Fixing Minimum Support Price for agricultural produce of all crops.
- 2. Computerization of Primary Agricultural Credit Societies.

3. Social Capital development.

4. Free electricity supply to farmers.

5. Waiver of agricultural loans by the banking system.

6. Setting up of cold storage facilities by the governments.

Select the correct answer using the code given below:

- (a) 1, 2 and 5 only
- (b) 1, 3, 4 and 5 only
- (c) 2, 3 and 6 only
- (d) 1, 2, 3, 4, 5 and 6

17. What is/are the advantage/advantages of implementing the 'National Agriculture Market' scheme?

- 1. It is a pan-India electronic trading portal for agricultural commodities.
- 2. It provides the farmers access to nationwide market, with prices commensurate with the quality of their produce.

Select the correct answer using the code given below :

- (a) 1 only
- (b) 2 only
- (c) Both 1 and 2
- (d) Neither 1 nor 2

18. Suraj Dhara Yojana is :

- (a) loan related
- (b) exchange of seeds
- (c) tikakaran
- (d) insurance related
- (e) None of the above

19. Who among the followings did not approve the idea of co-operative farming in India?





spardhaguru2022



Spardhaguru Current affairs



Spardhaguru1




SpardhaGuru



Spardha.guru



www.spardha.guru



(a) Jawahar Lal Nehru

(b) Lal Bahadur Sashtri

(c) Charan Singh

(d) Abul Kalam Azad

20. What is meant by a Bullock Capitalist?

(a) Farmers who are poor

(b) Farmers who are rich

(c) Farmers who have some resources but are not rich

(d) Farmers who are big Zamindars

QUANTITATIVE APTITUDE -

Topic Name - LCM and HCF

21. Find the maximum possible length of scale to measure exactly the following lengths: 128 cm, 64 cm, and 24 cm?

(A) 28 cm

(B) 30 cm

(C) 24 cm

(D) 8 cm

22. Find the largest number which will divide 61, 130 and 176 so as to leave the same number in each of the cases.

(A) 29

(B) 19

(C) 25

(D) 23

23. What is the least number that when divided by 60, 84, and 96 leaves the remainders 28, 52, and 64 respectively?

(A) 3328

(B) 3392

(C) 3318

(D) 3360

24. The least perfect square number which is divisible by 6, 8, 10 and 11, is:

(A) 108900

(B) 217800

(C) 435600

(D) 109800

25. The smallest square number, which is exactly divisible by 3, 4, 18, 60 and 108 is:

(A) 8100

(B) 5180

(C) 6400

(D) 3600

26. Find the smallest number which when divided by 27, 35 and 42 leaves the remainder 10, 18 and 25, respectively. Find the sum of the digits of the required number.

(A) 17

(B) 18

(C) 19

(D) 21

27. The least number which when divided by 5, 6 and 7 leaves remainder 1, 2 and 3 respectively is:

(A) 210

(B) 214

(C) 206

(D) 420

28. The HCF and LCM of two numbers are 13 and 715, respectively. How many such pairs are possible?





spardhaguru2022



Spardhaguru Current affairs



Spardhaguru1




SpardhaGuru



Spardha.guru



www.spardha.guru



(A) 2

(B) 3

(C) 1

(D) 4

29. On adding 4116 to the greatest three-digit number, it will be completely divisible by 9, 15, 16, and 20. Find out the number.

(A) 924

(B) 920

(C) 824

(D) 974

30. On M.G Road, three consecutive traffic lights change after 18, 63 and 72 seconds, respectively. If the lights are first switched on at 10:00 A.M. sharp, at what time will they change simultaneously?

(A) 10 : 08 : 04

(B) 10 : 08 : 24

(C) 10 : 08 : 44

(D) 10 : 08 : 34

REASONING

Topic Name – Analogy

31. Select the option that is related to the third number in the same way as the second number is related to the first number.

8 : 64 :: 7 : ?

(A) 78

(B) 49

(C) 32

(D) 58

32. Select the option that is related to the third number in the same way as the second number is related to the first number.

3 : 27 :: 5 : ?

(A) 45

(B) 19

(C) 30

(D) 50

33. Select the option that is related to the third number in the same way as the second number is related to the first number.

52 : 10 :: 63 : ?

(A) 9

(B) 18

(C) 27

(D) 45

34. Select the option that is related to the fourth number in the same way as the second number is related to the first number.

53 : 8 :: ? : 5

(A) 15

(B) 21

(C) 23

(D) 37

35. Select the option that is related to the third number in the same way as the second number is related to the first number.

$\frac{1}{11} : \frac{1}{121} :: \frac{1}{9} : ?$

(A) $\frac{1}{81}$

(B) $\frac{1}{18}$

(C) $\frac{1}{56}$





spardhaguru2022



Spardhaguru Current affairs



Spardhaguru1




SpardhaGuru



Spardha.guru



www.spardha.guru



(D) $\frac{1}{100}$

36. Select the option that is related to the third number in the same way as the second number is related to the first number.

82 : 6 :: 71 : ?

(A) 2

(B) 9

(C) 7

(D) 6

37. Select the option that is related to the third number in the same way as the second number is related to the first number.

4 : 14 :: 9 : ?

(A) 19

(B) 16

(C) 13

(D) 11

38. Select the option that is related to the third number in the same way as the second number is related to the first number.

5 : 30 :: 7 : ?

(A) 78

(B) 32

(C) 42

(D) 70

39. Select the option that is related to the third number in the same way as the second number is related to the first number.

6 : 216 :: 9 : ?

(A) 689

(B) 567

(C) 734

(D) 729

40. Select the option that is related to the fourth number in the same way as the second number is related to the first number.

12 : 146 :: ? : 227

(A) 17

(B) 15

(C) 13

(D) 14





spardhaguru2022



Spardhaguru Current affairs



Spardhaguru1




SpardhaGuru





Spardha.guru






www.spardha.guru








SPARDHAGURU SKILL EDGE APTITUDE ACADEMY

A GROUP OF SPARDHAGURU INDIA PRIVATE LIMITED

 www.spardha.guru  info@spardha.guru  Mysore, Bangalore

 **9071154445**  **9071164446**  **9071174447**

Banking

SSC

RRB


IBPS RRB

PGCET

CAT

MAT

Placement Entrance Exam's



Spardhaguru India Private Limited

