



spardhaguru2022



Spardhaguru Current affairs



Spardhaguru1




SpardhaGuru



Spardha.guru



www.spardha.guru



Dear Aspirants,

We invite you to subscribe to our WhatsApp & You tube channel and activate the notification bell to receive updates on job openings and current affairs.



General English

Topic - Adjective

1. Identify the kind of adjective used in the sentence below.

He had some rice for his dinner.

- a) Interrogative
- b) Emphasizing
- c) Adjective of Quality
- d) Adjective of Quantity

2. Pick out the adjective from the below sentence.

Either of the briefcase will do.

- a) will
- b) briefcase
- c) do
- d) either

3. Choose the class of adjective present in the below sentence.

Make sure you write the same thing tomorrow.

- a) Adjective of Quality
- b) Adjective of Quantity
- c) Demonstrative
- d) Indefinite

4. Select the option which identifies the adjective present in the below sentence and its class correctly.

Rahman bagged the second prize in that gruelling competition.

- a) gruelling – demonstrative adjective
- b) gruelling – exclamatory adjective
- c) second – definite numeral adjective
- d) bagged – emphasizing adjective

5. In the given sentence 'those' is a _____

Those papayas are ripe.

- a) Descriptive adjective





- b) Adjective of Quantity
- c) Demonstrative adjective
- d) Distributive adjective

6. Identify the sentence that uses a descriptive adjective.

- a) Shelly can be an intriguing person
- b) What is your favorite movie?
- c) I want to eat those fruits
- d) Karan has four bikes

7. In the below sentence, pick out the adjective and the class to which it belongs.

What a wonderful idea!

- a) what – exclamatory adjective
- b) wonderful– exclamatory adjective
- c) idea – emphasizing adjective
- d) wonderful – Distributive adjective

8. The adjective 'every' is a _____
Our school expects every student to perform well in academics.

- a) Adjective of Number
- b) Distributive adjective
- c) Demonstrative adjective
- d) Adjective of Quantity

9. Find out the kind of adjective used in the below sentence.

There are several diagrams in this lab manual.

- a) Indefinite numeral adjective
- b) Distributive adjective
- c) Demonstrative adjective
- d) Adjective of Quality

10. Select the option which identifies the adjective present in the sentence and it's class correctly.

Who is the most detested author of all time?

- a) who – Adjective of Quality
- b) detested – Descriptive adjective
- c) who – Demonstrative adjective
- d) author – Proper adjective

GA- Geography

Topic – Agriculture & Livestock of World

11. The leading producer of both wheat and rice in the world is :

- (a) China
- (b) India
- (c) U.S.A.
- (d) France

12. India's rank in rice production in the world is :

- (a) First
- (b) Second
- (c) Third
- (d) Fourth

13. Among the following, which one has been the largest exporter of rice in the world in the last five years?

- (a) China
- (b) India
- (c) Myanmar
- (d) Vietnam

14. Which of the following countries has the largest area under rice cultivation?

- (a) China
- (b) India
- (c) Japan
- (d) Philippines





spardhaguru2022



Spardhaguru Current affairs



Spardhaguru1




SpardhaGuru



Spardha.guru



www.spardha.guru



15. Arrange the following countries in the descending order of their wheat production and select the correct answer from the code given below :

1. China
2. India
3. Russia
4. U.S.A.

Code :

- (a) 1, 2, 3, 4
- (b) 1, 2, 4, 3
- (c) 2, 3, 4, 1
- (d) 4, 1, 2, 3

16. The largest wheat-producing country in the world is -

- (a) United States of America
- (b) India
- (c) China
- (d) Canada

17. Which of the following countries has the highest productivity of rice?

- (a) China
- (b) India
- (c) Japan
- (d) Germany

18. The cultivation of hybrid rice is most popular in -

- (a) Japan
- (b) China
- (c) Korea
- (d) India

19. The 'Rice Gene Bank' of the world is situated in -

- (a) China
- (b) the Philippines
- (c) Japan

(d) India

20. Which of the following countries accounts for about two-thirds of its export earnings from rice trade?

- (a) Japan
- (b) Thailand
- (c) Myanmar
- (d) Indonesia

Quantitative Aptitude

Topic - Average

21. 20 boys go for dinner. 16 of them spent Rs. 64 each on their dinner and rest spent Rs 4 more than the average expenditure of all 20. What was the total money spent by them?

- a. 1200
- b. 1500
- c. 1800
- d. 1300
- e. None of these

22. The average of 6 consecutive even numbers is 13. What is the product of the greatest and lowest numbers among them?

- a. 144
- b. 162
- c. 126
- d. 90
- e. 108

23. The average weight of a group of 50 boys is 60 kg. When 5 boys whose average weight is 80 kg left the group and 10 boys whose average weight is 70 kg joined the group, then find the new average weight of the group?

- a. 64 kg
- b. 65 kg
- c. 60 kg





d. 62 kg
e. 70 kg

24. Average expenditure of Manoj & Nawaz is Rs 4500 which is 10% less than that of Sanjay & Irfan. If Sanjay spends Rs 500 more than Nawaz & average expenditure of Nawaz & Sanjay is Rs 4250. Find average expenditure of Manoj & Irfan. (in Rs)

a. 4250
b. 5000
c. 4750
d. 5250
e. 4500

25. The average of four consecutive odd numbers A, B, C and D respectively is 24. What is the product of B and D?

a. 384
b. 475
c. 621
d. 625
e. None of these

26. The average marks obtained by 80 students in Math is 42. If the average marks of the passed students is 48 while the average marks of the failed students is 32, then find the difference of number of students who passed and failed in the math exam.

a. 30
b. 40
c. 50
d. 60
e. 20

27. There are two sections in a company. Section A has 30 employees and section B has 40 employees. The average salary of employees of section A and employees of section B is Rs.

5000 and Rs. 6000 respectively. Find the average salary of all the employees in the company.

a. Rs. 5571.43
b. Rs. 5000.02
c. Rs. 4872.12
d. Rs. 5000
e. None of these

28. Rohit Sharma has a certain average of runs for 14 innings. In a match against Australia, he played his 15th inning in which he was awarded man of the match for scoring 72 runs, thereby increasing his average by 2 runs. Find his average after playing with Australia.

a. 42
b. 44
c. 46
d. 40
e. None of these

29. The average age of 70 workers in a factory is 42. The average age of the men is 50 and that of the women is 30. What is the number of women working in the factory?

a. 18
b. 16
c. 25
d. 40
e. 28

30. The average score of A, B and C is 63. A's score is 15 less than D and 10 more than B's score. If D scored 30 marks more than the average score of A, B and C, then what is the sum of B's and C's scores?

a. 120
b. 111
c. 117





spardhaguru2022



Spardhaguru Current affairs



Spardhaguru1




SpardhaGuru



Spardha.guru



www.spardha.guru



- d. Cannot be determined
e. None of these

Reasoning

Topic – Alphanumeric Series

Directions for Questions 31 – 35: Study the following arrangement carefully and answer the question given below:

Q, A, B, A, C, D, E, I, G, A, B, U, V, C, A, B, D, Q, O, M, A, U, B, D, C, I, G, M, A, B, D, E, (C, I, D, F, E), B, A, D, Q

31. If all the A's are dropped from the above arrangement, which of the following will be tenth from right end?

- (a) B
(b) D
(c) E
(d) M
(e) C

32. Which of the following is eleventh to the right of forty from the right end?

- (a) A
(b) G
(c) M
(d) B
(e) D

33. How many such consonants are there in the above arrangement each of which is immediately preceded by a vowel and immediately followed by a consonant?

- (a) Nine
(b) Three
(c) Five
(d) Seven
(e) Eight

34. Which of the following is seventh to the right of fifteenth from the left end?

- (a) A
(b) M
(c) U
(d) V
(e) C

35. How many such pairs of alphabets are there in the series of alphabets given in BOLD in the above arrangement each of which has as many letters between them (in both forward and backward directions) as they have between them in the English alphabetical series?

- (a) One
(b) Two
(c) Three
(d) Four
(e) Five

Directions for Questions 36 – 40: Study the following arrangement carefully and answer the question given below:

J, L, 1, %, A, G, K, B, 9, 7, \$, &, Z, U, 3, Y, C, #, I, M, F, 4, D, N, @, E, P, V, 6, W, +, Q, S, 5, /, O

36. Four of the following five are alike in a certain way based on their positions in the given arrangement and so form a group. Which is the one that does not belong to that group?

- (a) JL%
(b) AGB
(c) 97&
(d) ZUC
(e) #IF

37. Which of the following is twenty-fifth to the right of thirty-fifth from the right end?

- (a) E





spardhaguru2022



Spardhaguru Current affairs



Spardhaguru1




SpardhaGuru



Spardha.guru



www.spardha.guru



- (b) P
- (c) V
- (d) 6
- (e) @

38. What will come in place of question mark (?) in the following series based on the above arrangement?

L%G, B7&, UY#, ?

- (a) MFD
- (b) M4D
- (c) M4N
- (d) M4@
- (e) None of these

39. Which of the following is twelfth to the right of twenty from the left end?

- (a) Q
- (b) +
- (c) S
- (d) 5
- (e) /

40. If all consonants are dropped from the above arrangement, which of the following will be fifteenth from the left end of the above arrangement?

- (a) @
- (b) 4
- (c) I
- (d) 6

Thank you

Murthy Sir

Aptitude Trainer

Spardhaguru Skill Edge Aptitude Academy

www.spardha.guru

